



# IQB

# IMPORTANT QUESTION BANK

Based on Latest Paper Pattern of Maharashtra State Board

## Geography



“  
**IQB KE SAATH  
SSC EKDUM  
TENSION FREE**  
”

**STD. X**  
(Eng. Med.)

**Target** Publications® Pvt. Ltd.

# **IQB** Important Question Bank

## **STD. X**

### **Geography**

#### **Salient Features**

- A compilation of Most Important Questions
- A great resource for expeditious and exhaustive board exam preparation
- Written as per Latest Board Paper Pattern
- Includes selective questions from 2019 - 2022 Board Papers
- Important inclusion: 'Assignments' and 'Time Management' to solve the Question Paper
- Includes Model Question Paper for self evaluation
- Inclusion of **QR Code** for students to access 'Solution' for the Model Question Paper.

Scan the QR Codes to view the videos on 'Technique of Map Reading', 'How to use stencil map for Q. No. 7' and 'Moderator's tips for solving board exam paper'.

Scan the adjacent QR Code to access Board Question Papers and Solutions of March 2019, December 2020 and March 2022.



Printed at: **Print to Print**, Mumbai

© Target Publications Pvt. Ltd.

*No part of this book may be reproduced or transmitted in any form or by any means, C.D. ROM/Audio Video Cassettes or electronic, mechanical including photocopying; recording or by any information storage and retrieval system without permission in writing from the Publisher.*

# PREFACE

**IQB Geography: Std. X** is a treasure house of the **Most Important Questions** that'd help students to face the Board Examination confidently. This book is created in accordance with latest Board Paper Pattern.

IQB (Important Question Bank) covers all types of questions such as 'Identify the odd man out, Name the following, Differentiate between, Answer the following on the basis of maps' etc. along with answers as per the marks allotted to them. The flow of the contents is mapped according to the paper pattern and is presented in the most lucid manner. Moreover, the questions provided are arranged in a chapter-wise format so that students can easily take a stock of it. Also three Assignments included for additional practice. Time Management is provided with Paper Pattern to aid students to solve the question paper within allotted time. We have provided One Model Question Paper at the end of the book that enables students to assess their level of preparation for the Board examination.

We have amalgamated technology with education and resultantly provided **QR Codes** for students to access videos on 'Technique of Map Reading', 'How to use stencil map for Q. No. 7', and 'Moderator's tips for solving board exam paper'. The **QR Code** also provides students an access to the 'Solution' given for the Model Question Paper. Apart from this through **QR Codes**, March 2019, Dec 2020 and March 2022 Board Question Papers are provided with solutions.

Armed with an arsenal of carefully crafted questions and relevant answers, we are confident that this book will cater to the needs of students and effectively assist them to achieve their goal.

*A book affects eternity; one can never tell where its influence stops.*

*Best of luck to all the aspirants!*

Publisher

**Edition:** Third

---

## Disclaimer

This reference book is transformative work based on 'Geography; Fourth Reprint: 2022' published by the Maharashtra State Bureau of Textbook Production and Curriculum Research, Pune. We the publishers are making this reference book which constitutes as fair use of textual contents which are transformed by adding and elaborating, with a view to simplify the same to enable the students to understand, memorize and reproduce the same in examinations.

This work is purely inspired upon the course work as prescribed by the Maharashtra State Bureau of Textbook Production and Curriculum Research, Pune. Every care has been taken in the publication of this reference book by the Authors while creating the contents. The Authors and the Publishers shall not be responsible for any loss or damages caused to any person on account of errors or omissions which might have crept in or disagreement of any third party on the point of view expressed in the reference book.

© reserved with the Publisher for all the contents created by our Authors.

No copyright is claimed in the textual contents which are presented as part of fair dealing with a view to provide best supplementary study material for the benefit of students.

---




## PAPER PATTERN

- Geography - Total : 40 Marks
- Time : 2 Hours

Q. No.	Type of Questions	Marks	Time Management
Q.1	Choose the correct option	04	5 mins
Q.2	Match the column	04	5 mins
Q.3	Answer in one sentence (4 out of 5)	04	10 mins
Q.4	A. Fill in the information in the Maps and fill the index (4 out of 6)	04	15 mins
	B. Observe the map and answer the following questions (4 out of 5)	04	15 mins
Q.5	Give Geographical Reasons (2 out of 4)	06	15 mins
Q.6	A. Draw a Graph based on the information provided and answer the question below <b>OR</b>	06	15 mins
	B. Read the Graph / Diagram and answer the questions. <i>(For Q. 6 solve any 1 question – A or B)</i>		
Q.7	Answer in detail (2 out of 4)	08	30 mins
	To Review and Re-checking	-	<b>10 mins</b>
	<b>Total</b>	<b>40 Marks</b>	<b>120 mins</b>

[**Note:** Q.1 to Q.3 may include other types of objective questions as well.]

[Maharashtra State Board of Secondary and Higher Secondary Education, Pune - 04]

<p>Scan the <b>QR Code</b> to see the video on <b>How to use the stencil map</b> for Q. 7.</p> 	<p>Scan the <b>QR Code</b> to see the <b>Moderator's Tips</b> solving the Geography Question Paper.</p> 	<p>[<b>P.S.</b> Scan this <b>QR Code</b> to get a better insight of <b>Map Reading.</b>]</p> 
--	---	--

# INDEX

Q. No.	Types	Nature of Questions	Page No.
1.	1.	Choose the correct option and complete the statement	1
	2.	Identify the correct group	9
	3.	Identify the correlation and Make a chain	11
2.	1.	Match the following	13
	2.	Identify the wrong pair	15
	3.	Arrange in correct sequence	16
	4.	Identify the odd man out	17
	5.	Complete the table	20
3.	1.	Answer in one sentence	21
	2.	Name the following	23
	3.	State whether the sentence is right or wrong and correct the wrong ones	24
	4.	Classify the following	28
	5.	Differentiate between	29
	6.	Write Short Notes on	33
•	Assignment for Q.1, Q. 2 & Q. 3		38
4. (A)		Mark the following in the outline map supplied to you, write the names and give index	40
4. (B)		Observe the given map and answer the following questions.	61
5.		Give geographical reasons	70
•	Assignment for Q.4 (A), Q. 4 (B) & Q. 5		84
6. (A)		Draw the graph and answer the following questions.	86
6. (B)		Observe the graph and answer the following questions.	93
7.		Answer in Detail	100
•	Assignment for Q.6 (A), Q. 6 (B) & Q. 7		118
		Model Question Paper	120

**Note: Textual exercise questions are represented by \* mark.  
Intext questions are represented by # mark.**

# Detailed Analysis of Question Paper

## Geography

Time: 2 Hours

Total Marks: 40

### Note:

- i. All questions/activities are compulsory.
- ii. Figures to the right indicate full marks.
- iii. For Q. No. 4(A) use supplied outline map of Brazil or India and tie it to your answer-book.
- iv. For Q. No. 6(A) use the graph paper supplied to you and attach it to the main answer-book.
- v. Use of stencil is allowed for drawing map.
- vi. Draw neat diagrams and sketches wherever necessary.
- vii. Answers should be written in Black and Blue ink only.
- viii. Use of pencil/colour pencil is allowed for diagrams, sketches and map work.
- ix. Answers written in pencils will not be considered.

---

**Q.1. Complete the following sentences by choosing the appropriate alternatives from those given and rewrite the sentences in your answer-book: [4]**

- This question carries 4 marks. In this question, there are 4 questions of 1 mark each. There is no option for this question. All questions are compulsory.
- It includes various question types such as ‘Choose the correct options, Identify the correct group and Identify the correlation and make a chain’.
- In ‘Choose the correct options’, students are expected to write the complete statement and underline the answer.
- However, in ‘Identify the correct group’, students are expected to write only the answer.
- In ‘Identify the correlation and make a chain’, students are expected to identify the correlation among the three columns.

**Q.2. Match the following: [4]**

- This question carries 4 marks. In this question, there are 4 questions of 1 mark each. There is no option for this question. All questions are compulsory.

- It includes various question types such as ‘Match the following’ Arrange in correct sequence, Identify the wrong pair and Identify the odd man out’.
- In exam, any one type may be asked.
- In ‘Identify the odd man out’, students are expected to write only answer.
- In ‘Match the following’, students are expected to write the question as well as the answer.
- In ‘Arrange the sentences in correct sequence’, students are expected to write the answers in sequence, one after the other.
- In ‘Identify the wrong pair’, students are expected to write only the answer.

**Q.3. State whether the statements are right or wrong. Correct the wrong ones and rewrite the sentence. (Any Four) [4]**

- This question carries 4 marks. It includes various question types like ‘Answer in one sentence’, ‘Name the following’, ‘State whether the sentence is right or wrong and correct the wrong ones’, ‘Classify the following’, ‘Write Short notes on’, and ‘Differentiate between’. In exam, any one type will be asked. There will be options in this question.
- ‘Answer in one sentence, Name the following and State whether the sentence is right or wrong and correct the wrong ones will be asked for 1 mark. Here, 5 questions will be given; students have to attempt any 4 questions.
- ‘Differentiate between’ and ‘Write Short notes on’ will be asked for 2 marks. ‘Observe the Here, 3 questions will be given; students have to attempt any 2 questions of 2 marks each.
- In ‘State whether the sentence is right or wrong and correct the wrong ones’, students are expected to mention whether the sentence is right or wrong. Don’t forget to correct the wrong sentence.
- In ‘Classify the following’, students can write the answer in a tabular form for better presentation.

**Q.4. (A) Fill the following information in the map of India/Brazil, label and prepare index. (Any Four) [4]**

- This question carries 4 marks. Out of 6 questions, students are expected to attempt any four questions, carrying 1 mark each.
- To solve this question, outline map of India/Brazil will be provided.

- Here, students are expected to fill the map with the given information and make Index.
- Remember, map work has to done with pencil / colour pencil. Don't use pen.
- Regular practice of maps is essential if you want to score full marks.

**(B) Observe the following map and answer the questions.**  
**(Any Four) [4]**

- This question carries 4 marks.
- Out of 5 questions, students are expected to attempt any four questions, carrying 1 mark each. In this type of question, students have to observe the map carefully and answer the questions.
- Remember while answering the questions; observe the direction given in the map, the type of map as well as the index given on the map.

**Q.5. Give geographical reasons. (Any Two) [6]**

- This question carries 6 marks.
- In this question type, there are 4 statements carrying 3 marks each. Out of these, students are expected to explain any 2 statements with reasons.
- The answers should be written in points.

**Q.6. (A) Draw a graph based on the information provided and answer the question below [6]**

- This question carries 6 marks and it is mainly based on Graph.
- **Here, students have to attempt either Q.6 (A) or Q.6 (B).**
- In Q.6 (A), students are expected to draw the graph with the help of the given statistical information. Correct graph will fetch 3 marks. Also, students have to answer 3 questions of 1 mark each. There is no option.
- While making the graph, scale to be taken on X-axis and Y-axis is very important. Secondly, if there are decimal digits then students can take the approximate value. For e.g. If the digit is 15.3, students can take the approximate value, i.e. 15 and if the digit is 15.7 then students can take the approximate value, i.e. 16.
- Remember, graph work has to done with **Pencil only. Don't use pen.**



OR

**Q.6. (B) Read the given graph and answer the following questions.**

**[6]**

- In Q.6 (B), students have to read the graph and answer the given questions.
- Here, students should observe minutely the details given on X-axis and Y-axis.
- Each question carries 1 mark. There is no option. All the questions are compulsory.

**Q.7. Answer in detail. (Any Two)**

**[8]**

- This question carries 8 marks. It includes the question of 'Answer in detail'.
- Out of 3 questions having 4 marks each, students are expected to solve any 2 questions.
- Here, students to write the answers in points for better presentation.
- Also students can use the stencils in the answer.



# Question 1

Choose the correct options and complete the sentences

## CHAPTER 2: LOCATION AND EXTENT

- \*1. India's southernmost point is known as:  
 (A) Lakshadweep (B) Kanyakumari  
 (C) Indira Point (D) Port Blair

**Ans:** India's southernmost point is known as Indira Point.

2. The capital of Brazil is \_\_\_\_\_.  
 (A) Brasilia (B) Sao Paulo  
 (C) Pau Brasil (D) Amapa

**Ans:** The capital of Brazil is Brasilia.

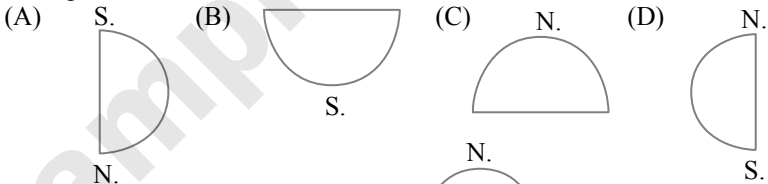
- \*3. Both the countries have \_\_\_\_\_ type of government.  
 (A) Military (B) Communist  
 (C) Republic (D) Presidential

**Ans:** Both the countries have Republic type of government.

4. Brazil was under \_\_\_\_\_ rule for more than three centuries.  
 (A) British (B) Portuguese  
 (C) Dutch (D) French

**Ans:** Brazil was under Portuguese rule for more than three centuries.

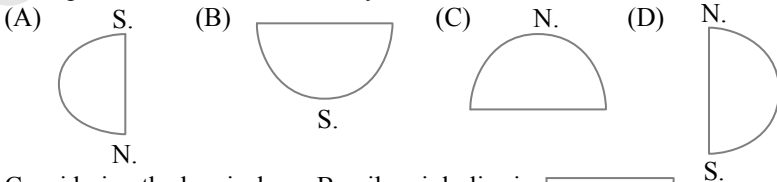
- \*5. Considering hemisphere, which shape correctly represents the hemisphere in which India lies?



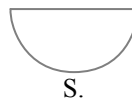
**Ans:** Considering hemisphere, India lies in



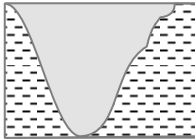
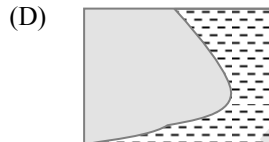
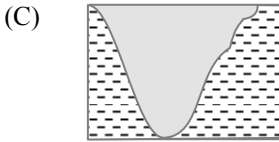
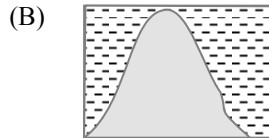
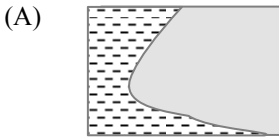
- \*6. Considering the hemisphere, which shape correctly represents the hemisphere in which Brazil mainly lies?



**Ans:** Considering the hemisphere, Brazil mainly lies in

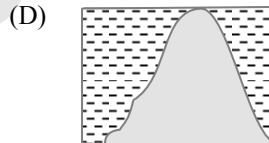
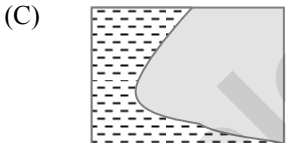
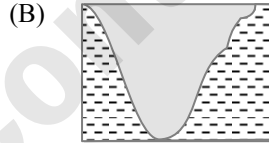
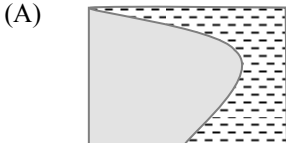


\*7. Which of the following shapes show the coastal part of India correctly?



**Ans:** shows the coastal part of India correctly.

\*8. Which of the following shapes show the coastal part of Brazil correctly?



**Ans:** shows the coastal part of Brazil correctly.

\*9. These two countries in South America do not share their border with Brazil.

- (A) Chile - Ecuador (B) Argentina - Bolivia  
(C) Columbia - French Guiana (D) Surinam – Uruguay

**Ans:** Chile – Ecuador in South America do not share their border with Brazil.

10. \_\_\_\_\_ is seen as one of the world’s major market and contributor to economic growth of the world.

- (A) India (B) Brazil (C) Sri Lanka (D) Japan

**Ans:** Brazil is seen as one of the world’s major market and contributor to economic growth of the world.

*[Note: Answers for the one chapter have been provided in the appropriate format. Students are expected to follow the above format in the exam.]*

### CHAPTER 3: PHYSIOGRAPHY AND DRAINAGE

1. \_\_\_\_\_ is the southern most range of the Himalayas.  
(A) Lesser Himalayas (B) Himadri  
(C) Kumaun Himalayas (D) Siwaliks

**Ans: Siwaliks**

- \*2. To the foot hills of the Aravalis, \_\_\_\_\_.  
(A) lies the Bundelkhand Plateau (B) lies the Mewad Plateau  
(C) lies the Malwa Plateau (D) lies the Deccan Plateau

**Ans: lies the Mewad Plateau**

3. The world's largest delta is \_\_\_\_\_.  
(A) Chitrabans (B) Rhine  
(C) Sunderbans (D) Ria coast

**Ans: Sunderbans**

- \*4. The Lakshadweep Islands of Arabian Sea are \_\_\_\_\_.  
(A) made from the part separated from the mainland  
(B) coral islands  
(C) volcanic islands  
(D) continental islands

**Ans: coral islands**

- \*5. Brazil is covered mainly by \_\_\_\_\_. **[Mar 2019]**  
(A) Highlands (B) Plains  
(C) Mountainous region (D) Dissected hills

**Ans: Highlands**

6. The Great Escarpment gives rise to the rain shadow area in the north-eastern part of the \_\_\_\_\_.  
(A) Andes Mountains (B) Brazilian Highland  
(C) Guyana Highlands (D) Amazon basin

**Ans: Brazilian Highland**

7. The large coastal island which is located between the mouths of River Amazon and River Tocantins is \_\_\_\_\_.  
(A) Marajo (B) Casino (C) Bahamas (D) Jamaican

**Ans: Marajo**

- \*8. The Amazon Basin is mainly \_\_\_\_\_.  
(A) characterized by droughts (B) filled by swamps  
(C) covered by dense forests (D) fertile

**Ans: covered by dense forests**

- \*9. Amazon is a large river in the world. Near its mouth, \_\_\_\_\_. **[Dec 2020]**  
(A) deltaic regions are found (B) no deltas are found  
(C) deposition of sediments occurs (D) fishing is done

**Ans: no deltas are found**

- \*10. Like Brazil, India too has \_\_\_\_\_.
- (A) high mountains (B) ancient plateau  
(C) west-flowing rivers (D) snow-capped mountains

**Ans: ancient plateau**

11. The \_\_\_\_\_ form a major water divide in the Peninsula.
- (A) Eastern Ghats (B) Aravali Mountains  
(C) Western Ghats (D) Satpura Mountains

**Ans: Western Ghats**

12. River \_\_\_\_\_ is the second largest river system of India in terms of the catchment area.

- (A) Ganga (B) Sindhu  
(C) Godavari (D) Krishna

**Ans: Godavari**

#### **CHAPTER 4: CLIMATE**

1. Brazil experiences wide range of climatic variations, because of its the vast \_\_\_\_\_ extent.

- (A) latitudinal (B) equatorial  
(C) longitudinal (D) mountainous

**Ans: latitudinal**

2. The \_\_\_\_\_ passes through the northern part of Brazil.

- (A) Tropic of Cancer (B) Tropic of Capricorn  
(C) Equator (D) Prime Meridian

**Ans: Equator**

3. The \_\_\_\_\_ passes through the middle of India.

- (A) Equator (B) Tropic of Capricorn  
(C) Tropic of Cancer (D) Prime Meridian

**Ans: Tropic of Cancer**

4. India's climate is \_\_\_\_\_ type. [Mar 2019]

- (A) Humid (B) monsoon (C) Equatorial (D) Cold

**Ans: monsoon**

5. The rainfall is low in parts of Gujarat and Rajasthan due to the moisture laden winds blowing parallel to the \_\_\_\_\_.

- (A) Himalayas (B) Aravalis  
(C) Sahyadri (D) Shiwalik

**Ans: Aravalis**

6. Due to the natural obstruction of the Himalayas, \_\_\_\_\_ type of rainfall occurs.

- (A) Conventional (B) Orographic  
(C) Cyclonic (D) Unexpected

**Ans: Orographic**

## CHAPTER 5: NATURAL VEGETATION AND WILDLIFE

1. In most parts of the \_\_\_\_\_ region in Brazil, it rains throughout the year.  
(A) Equatorial (B) Caatinga (C) Savanna (D) Pampas

**Ans: Equatorial**

2. The largest number of vegetation species in the world is found in \_\_\_\_\_.  
(A) Brazil (B) India  
(C) North America (D) Australia

**Ans: Brazil**

3. Because of the \_\_\_\_\_ in Brazil, there is a large amount of oxygen that is released in the environment.  
(A) Evergreen rainforests (B) semi-evergreen  
(C) Deciduous forests (D) Savanna

**Ans: Evergreen rainforests**

4. The evergreen rainforests of Brazil are called as the '\_\_\_\_\_ of the world'.  
(A) lungs (B) heart (C) brain (D) king

**Ans: lungs**

5. In India, evergreen forests are found in the regions which receive more than \_\_\_\_\_ mm of rainfall on an average along with abundant sunlight.  
(A) 2000 (B) 1000 (C) 750 (D) 1500

**Ans: 2000**

6. In India, \_\_\_\_\_ forests are found in regions receiving rainfall between 1000 mm and 2000 mm.  
(A) Coastal (B) Deciduous  
(C) Himalayan (D) Evergreen

**Ans: Deciduous**

7. Teak is mainly found in the \_\_\_\_\_ type of forest. **[Mar 2019]**  
(A) Coastal (B) Theory and bush  
(C) Deciduous (D) Coniferous

**Ans: Deciduous**

8. In India \_\_\_\_\_ forest are found in regions receiving rainfall less than 500 mm.  
(A) Thorny and shrub (B) Evergreen  
(C) Deciduous (D) Semi-evergreen

**Ans: Thorny and shrub**

## CHAPTER 6: POPULATION

1. As per 2011 Census, India's population was around \_\_\_\_\_ crores.  
(A) 111 (B) 120 (C) 121 (D) 122

**Ans: 121**

2. Population wise India is \_\_\_\_\_ largest country in the world.

**[Dec 2020]**

- (A) first (B) fifth (C) seventh (D) second

**Ans: second**

3. India's average population density is \_\_\_\_\_ persons per sq.km. as per 2011 Census.

- (A) 381 (B) 382 (C) 385 (D) 388

**Ans: 382**

4. With a population of around 19 crores, (as per 2010 Census) Brazil ranks \_\_\_\_\_ in the world.

- (A) 5<sup>th</sup> (B) 4<sup>th</sup> (C) 6<sup>th</sup> (D) 2<sup>nd</sup>

**Ans: 5<sup>th</sup>**

5. Brazil occupies \_\_\_\_\_ of world's total land.

- (A) 6.5 % (B) 5.6 % (C) 7.6 % (D) 8.2 %

**Ans: 5.6 %**

6. The density of population in Brazil is around \_\_\_\_\_ persons per sq.km. as per 2010 census.

- (A) 23 (B) 25 (C) 28 (D) 29

**Ans: 23**

7. The density of population in the highlands of Brazil is \_\_\_\_\_.

- (A) less (B) more  
(C) moderate (D) extreme

**Ans: moderate**

## CHAPTER 7: HUMAN SETTLEMENTS

1. \_\_\_\_\_ is the major factor that affects the concentration of settlements.

- (A) Proximity to the Sea (B) Plain region  
(C) Availability of water (D) Climate

**Ans: Availability of water**

2. The \_\_\_\_\_ settlements are found on the Vindhyan Plateau.

- (A) scattered (B) nucleated (C) star shape (D) linear

**Ans: nucleated**

3. Concentrated settlements are found in Narmada Valley because of its \_\_\_\_\_.

- (A) forested land (B) cultivable land  
(C) undulating topography (D) industries

**Ans: cultivable land**

4. In India dispersed settlements are found \_\_\_\_\_.
- (A) Near the rivers (B) Near the transport routes  
(C) in hilly areas (D) in industrial regions

**Ans: in hilly areas**

5. Sao Paulo has extensive area under rich soil which makes it ideal for growing \_\_\_\_\_.
- (A) tea (B) coffee  
(C) tobacco (D) sugarcane

**Ans: coffee**

6. The rural areas of Brazil, such as the north-east Highlands suffer from extreme \_\_\_\_\_.
- (A) floods (B) droughts  
(C) inaccessibility (D) accessibility

**Ans: droughts**

7. The \_\_\_\_\_ types of settlement are found in North-eastern part of Brazil.
- (A) nucleated (B) linear  
(C) dispersed (D) star-shaped

**Ans: dispersed**

8. The growth of urbanisation in India has been \_\_\_\_\_.
- (A) more (B) slow  
(C) medium (D) None of these

**Ans: slow**

9. Urbanisation has been \_\_\_\_\_ in the southern part than in the northern part in India.
- (A) more (B) slow  
(C) medium (D) non of these

**Ans: more**

10. The most urbanised state in India with 62% population living in urban areas is \_\_\_\_\_.
- (A) Goa (B) Maharashtra  
(C) Gujarat (D) Uttar Pradesh

**Ans: Goa**

11. About \_\_\_\_\_ of Brazil population lives in an urban area.
- (A) 50% (B) 75% (C) 86% (D) 60%

**Ans: 86%**

12. Which State has the least urbanisation in Brazil?
- (A) Para (B) Amapa  
(C) Espirito Santo (D) Parana

**Ans: Para**



13. The government of Brazil is promoting \_\_\_\_\_ policy.  
(A) Go East (B) Go West  
(C) Go South (D) Go North

**Ans: Go West**

### **CHAPTER 8: ECONOMY AND OCCUPATIONS**

- \*1. The economies of India and Brazil are of the \_\_\_\_\_ type.  
(A) undeveloped (B) developed  
(C) developing (D) highly developed

**Ans: developing**

- \*2. The economy of Brazil is mainly dependent on the \_\_\_\_\_ activities there.

- (A) Primary (B) Secondary  
(C) Tertiary (D) Quaternary

**Ans: Tertiary**

- \*3. India's per capita income is less than Brazil due to \_\_\_\_\_.  
(A) low national income (B) massive population  
(C) big family size (D) low foodgrain production

**Ans: massive population**

4. Brazil is the largest exporter of \_\_\_\_\_ in the world. [Mar 2019]  
(A) Mineral oil (B) Tea (C) Bajra (D) Coffee

**Ans: Coffee**

5. The main occupation of India is \_\_\_\_\_.  
(A) agriculture (B) mining  
(C) animal husbandry (D) fishing

**Ans: agriculture**

6. The distribution of cement industry is highly conditioned by the availability of \_\_\_\_\_ materials.

- (A) raw (B) finished  
(C) processed (D) prepared

**Ans: raw**

### **CHAPTER 9: TOURISM, TRANSPORT AND COMMUNICATION**

1. The new capital city of Brazil, that is, \_\_\_\_\_ is a tourist attraction.  
(A) Rio De Janeiro (B) Sao Paulo  
(C) Brasilia (D) Bolivia

**Ans: Brasilia**

2. The contribution of the tourism sector to the GDP of India is \_\_\_\_\_ than Brazil.

- (A) less (B) more  
(C) minuscule (D) none of these

**Ans: less**

3. The south-flowing \_\_\_\_\_ river of Brazil is important for waterways.  
(A) Parana (B) Negro  
(C) Uruguay (D) Paraguay

**Ans: Parana**

4. Approximately \_\_\_\_\_ % of India's foreign trade moves through ocean routes.  
(A) 86 (B) 19 (C) 90 (D) 95

**Ans: 95**

5. In India, the railway network is relatively less dense in the state of \_\_\_\_\_.  
[Dec 2020]

- (A) Uttar Pradesh (B) Maharashtra  
(C) Tamil Nadu (D) Rajasthan

**Ans: Rajasthan**

6. The density of road network is concentrated in the \_\_\_\_\_ part of Brazil.

- (A) eastern (B) western  
(C) northern (D) none of these

**Ans: eastern**

7. Brazil has \_\_\_\_\_ time zones.  
(A) four (B) two (C) three (D) five

**Ans: four**

8. The difference between the two extreme most longitudes of India is \_\_\_\_\_ minutes.

- (A) 130 (B) 140 (C) 120 (D) 110

**Ans: 120**

**Identify the correct group**

### CHAPTER 3: PHYSIOGRAPHY AND DRAINAGE

**\*1. The order of plateaus of India from south to north**

- i. Karnataka-Maharashtra-Bundelkhand
- ii. Chhota Nagpur-Malwa-Marwad
- iii. Telangana-Maharashtra-Marwad

**Ans: Karnataka-Maharashtra-Bundelkhand**

**\*2. The order of physiographic units in Brazil while going from North-West to South-East.**

- i. Parana River basin-Guyana Highlands-Brazilian Highlands
- ii. Guyana Highlands-Amazon river basin-Brazilian Highlands
- iii. Coastal Plains-Amazon river basin-Brazilian Highlands

**Ans: Guyana Highlands-Amazon river basin-Brazilian Highlands**

**\*3. These rivers of Brazil are north-flowing**

- i. Juruika-Xingu-Aragua
- ii. Negro-Branco-Paru
- iii. Japura-Jarua-Purus

**Ans:** Juruika-Xingu-Aragua

**CHAPTER 7: HUMAN SETTLEMENTS**

**1. Places of Nucleated Settlements in India**

- i. Paddy lands in Bihar, western and southern Rajasthan, Narmada valley, Himalayan slopes
- ii. Vindhya Plateau, Madhya Pradesh, Narmada valley, western and southern Rajasthan
- iii. Paddy lands in Bihar, Vindhya Plateau, Plateau region of Narmada valley, Uttar Pradesh
- iv. Tribal parts covering central part of India, Himalayan slopes, Vindhya plateau, eastern coast.

**Ans:** Paddy lands in Bihar, Vindhya Plateau, Plateau region of Narmada valley, Uttar Pradesh

**2. Places of Dispersed Settlements in India**

- i. Western and southern Rajasthan, Himalayan slopes, Land with dissected and uneven topography, Tribal parts covering central part of India
- ii. Land with dissected and uneven topography, Vindhya Plateau, Himalayan slopes, Tribal parts covering central part of India
- iii. Western Rajasthan, Uttar Pradesh, North-eastern India, Narmada valley
- iv. Eastern coast, Himalayan slopes, southern Rajasthan, Land with dissected and uneven topography

**Ans:** Western and southern Rajasthan, Himalayan slopes, Land with dissected and uneven topography, Tribal parts covering central part of India

**3. States of India having less urbanisation**

- i. Kerala, Tamil Nadu, Uttarakhand, Bihar
- ii. Bihar, Assam, Himachal Pradesh, Odisha
- iii. Maharashtra, Gujarat, Tamil Nadu, Kerala
- iv. Goa, Mizoram, Odisha, Assam

**Ans:** Bihar, Assam, Himachal Pradesh, Odisha

**4. States of Brazil having most urbanisation**

- i. Acre, Para, Rondonia, Goias
- ii. Roraima, Tocantins, Bahia, Sao Paulo
- iii. Parana, Santa Catarina, Ceara, Maranhao
- iv. Sao Paulo, Goias, Rio De Janeiro, Espirito Santo

**Ans:** Sao Paulo, Goias, Rio De Janeiro, Espirito Santo

**Identify the correlation and Make a chain**

**CHAPTER 2: LOCATION AND EXTENT**

1.

A		B		C	
1.	India	i.	North Atlantic Ocean	a.	South Atlantic Ocean
2.	Brazil	ii.	Eastern Hemisphere	b.	Tropic of capricorn
3.	Indian coastline	iii.	Southern Hemisphere	c.	Tropic of cancer
4.	Brazilian coastline	iv.	Arabian Sea	d.	Lakshadweep Islands

**Ans:**

A		B		C	
1.	India	ii.	Eastern Hemisphere	c.	Tropic of Cancer
2.	Brazil	iii.	Southern Hemisphere	b.	Tropic of capricorn
3.	Indian coastline	iv.	Arabian Sea	d.	Lakshadweep Islands
4.	Brazilian coastline	i.	North Atlantic Ocean	a.	South Atlantic Ocean

**CHAPTER 3: PHYSIOGRAPHY AND DRAINAGE**

1.

A		B		C	
1.	Ganga River	i.	River Tapi	a.	There are islands at its mouth
2.	Amazon River	ii.	Sediments deposit at its mouth	b.	Second largest rivers system of India in terms of the catchment area
3.	Rivers meeting Bay of Bengal	iii.	Sediments do not deposit at its mouth	c.	Flows slowly through rift valley
4.	Rivers meeting Arabian Sea	iv.	River Godavari	d.	Formed from a large delta

**Ans:**

<b>A</b>		<b>B</b>		<b>C</b>	
1.	Ganga River	ii.	Sediments deposit at its mouth	d.	Formed from a large delta
2.	Amazon River	iii.	Sediments do not deposit at its mouth	a.	There are islands at its mouth
3.	Rivers meeting Bay of Bengal	iv.	River Godavari	b.	Second largest rivers system of India in terms of the catchment area
4.	Rivers meeting Arabian Sea	i.	River Tapi	c.	Flows slowly through rift valley



## AVAILABLE NOTES FOR STD. X: (Eng., Mar. & Semi Eng. Medium)

### PERFECT SERIES

- English Kumarbharati
- मराठी अक्षरभारती
- हिंदी लोकभारती
- हिंदी लोकवाणी
- आमोद: सम्पूर्ण-संस्कृतम्
- आनन्द: संयुक्त-संस्कृतम्
- History and Political Science
- Geography
- Mathematics (Part - I)
- Mathematics (Part - II)
- Science and Technology (Part - 1)
- Science and Technology (Part - 2)

### PRECISE SERIES

- Science and Technology (Part - 1)
- Science and Technology (Part - 2)
- History, Political Science and Geography

### PRECISE SERIES

- My English Coursebook
- मराठी कुमारभारती
- इतिहास व राज्यशास्त्र
- भूगोल
- गणित (भाग - I)
- गणित (भाग - II)
- विज्ञान आणि तंत्रज्ञान (भाग - १)
- विज्ञान आणि तंत्रज्ञान (भाग - २)

### WORKBOOK

- English Kumarbharati
- मराठी अक्षरभारती
- हिंदी लोकभारती
- My English Coursebook
- मराठी कुमारभारती

### Additional Titles: (Eng., Mar. & Semi Eng. Med.)

- ▶ **Grammar & Writing Skills Books** (Std. X)
  - Marathi • Hindi • English
- ▶ Hindi Grammar Worksheets
- ▶ SSC 54 Question Papers & Activity Sheets **With Solutions**
- ▶ आमोद: (सम्पूर्ण-संस्कृतम्)  
SSC कृतिपत्रिका संच **11 Activity Sheets With Solutions**
- ▶ हिंदी लोकवाणी (संयुक्त), संस्कृत-आनन्द: (संयुक्तम्)  
SSC कृतिपत्रिका संच **12 Activity Sheets With Solutions**
- ▶ IQB (Important Question Bank)
- ▶ Mathematics Challenging Questions
- ▶ Geography Map & Graph Practice Book



Scan the QR code to buy e-book version of Target's Notes on Quill - The Padhai App



**Visit Our Website**

**Target Publications® Pvt. Ltd.**  
Transforming lives through learning.

#### Address:

2<sup>nd</sup> floor, Aroto Industrial Premises CHS,  
Above Surya Eye Hospital, 63-A, P. K. Road,  
Mulund (W), Mumbai 400 080

**Tel:** 88799 39712 / 13 / 14 / 15

**Website:** www.targetpublications.org

**Email:** mail@targetpublications.org



Explore our range of **STATIONERY**

