

**SAMPLE CONTENT**



**NEET - UG**

As per latest syllabus  
prescribed by  
**NMC**

**CHEMISTRY TEST SERIES**

**With Answer Key & Solutions**

**1700 MCQs**

- **22** Topic Tests
- **7** Revision Tests
- **5** Model Test Papers



**Target** Publications<sup>®</sup> Pvt. Ltd.

# NEET (UG) CHEMISTRY TEST SERIES

With Answers & Solutions

Updated as per latest syllabus prescribed by  
NMC on 06<sup>th</sup> October, 2023

## Salient Features

- Includes '1700' MCQs for practice in the form of:
  - **22 Topic Tests**
  - **7 Revision Tests**
  - **5 Model Tests**
- Contains a variety of questions according to the most recent paper pattern:
  - **Assertion-Reason** - **Statement-based**
  - **Match the columns**
- Includes newly added chapter: **Principles Related to Practical Chemistry**
- Solutions to the questions are provided for better understanding

Printed at: **Print to Print**, Mumbai

© Target Publications Pvt. Ltd.

No part of this book may be reproduced or transmitted in any form or by any means, C.D. ROM/Audio Video Cassettes or electronic, mechanical including photocopying; recording or by any information storage and retrieval system without permission in writing from the Publisher.

P.O. No. 12000

TEID: 3501

## PREFACE

Target's 'NEET (UG) Chemistry Test Series' is a complete practice book, extremely handy and a go to tool for the preparation of NEET (UG) examinations.

The core objective of the book is to help students gauge their preparedness to appear for NEET (UG) Examination, as it includes a beautiful assortment of MCQ's in the form of Topic Tests and Revision Tests along with Model Test Papers as per latest paper pattern.

- **Topic Tests** are provided for powerful concept building.
- **Revision Tests** develop confidence in the students as it includes MCQs from different topics.
- **Model Tests** help students to improve their performance in chemistry by analyzing their strengths and shortcomings.

All Test Papers in this book have been created in line with the examination pattern and touches upon all the conceptual nodes of the subject.

We have provided answers to all the questions along with detailed solutions for difficult questions.

We are sure that, these question papers would provide ample practice to students in a systematic manner and would boost their confidence to face the challenges posed in examinations.

We welcome your valuable suggestions and feedback towards this book.

*We wish the students all the best for their examinations!*

- Publisher  
**Edition:** Second

The journey to create a complete book is strewn with triumphs, failures and near misses. If you think we've nearly missed something or want to applaud us for our triumphs, we'd love to hear from you.

Please write to us on : [mail@targetpublications.org](mailto:mail@targetpublications.org)

*A book affects eternity; one can never tell where its influence stops.*

---

### Disclaimer

This reference book is transformative work based on textual contents published by National Council of Educational Research and Training (NCERT). We the publishers are making this book which constitutes as fair use of textual contents which are transformed in the form of Multiple Choice Questions and their relevant hints, with a view to enable the students to understand, memorize and reproduce the same in NEET (UG) examination.

This work is purely inspired by the paper pattern prescribed by NTA (National Testing Agency). Every care has been taken in the publication of this reference book by the Authors while creating the contents. The Authors and the Publishers shall not be responsible for any loss or damages caused to any person on account of errors or omissions which might have crept in or disagreement of any third party on the point of view expressed in the reference book.

© reserved with the Publisher for all the contents created by our Authors.

No copyright is claimed in the textual contents which are presented as part of fair dealing with a view to provide best supplementary study material for the benefit of students.

---

## PAPER PATTERN

➤ **Paper Pattern NEET (UG):**

The Paper Pattern of NEET (UG) comprises of subjects - Physics, Chemistry and Biology (Botany and Zoology). Each subject will consist of two sections. Section A will consist of 35 Questions and Section B will have 15 questions. Out of these 15 Questions, candidates can choose to attempt any 10 Questions.

The Paper Pattern for the **NEET (UG)** Examination is as follows:

Sr. No.	Subject(s)	Section(s)	No. of Questions(s)	Mark(s) (Each Question Carries 04 (Four) Marks)	Type of Questions(s)
1.	Physics	Section A	35	140	MCQ (Multiple Choice Questions)
		Section B	*15	40	
2.	Chemistry	Section A	35	140	
		Section B	*15	40	
3.	Botany	Section A	35	140	
		Section B	*15	40	
4.	Zoology	Section A	35	140	
		Section B	*15	40	
<b>Total Marks</b>				<b>720</b>	

*\* Only the first 10 attempted questions from out of 15 will be considered for evaluation.*

**Important points to note for Section A & B:**

- i. Each question carries 04 (four) marks and, for each correct answer candidate will get 04 (four) marks.
- ii. For each incorrect answer, 01(one) mark will be deducted from the total score.
- iii. To answer a question, the candidate has to find, for each question, the correct answer/best option.
- iv. In case of the challenge of key, if more than one option is found to be correct then all/any one of the multiple correct/best options marked will be given four marks (+4). However, unanswered/unattempted questions will be given no marks.
- v. If a question is found to be incorrect or the Question is dropped then Four marks (+4) will be awarded to all those who have attempted the question. The reason could be due to human error or technical error.
- vi. Candidates are advised to do the calculations with the constants given (if any) in the questions.

➤ **Mode of Examination:**

NEET (UG) is a Pen & Paper-based Test, to be answered on the specially designed machine gradable OMR sheet using Ball Point Pen provided at the Centre.

➤ **Duration of Examination:**

The duration of the examination would be **three (03) hours and 20 minutes**.

## INDEX

Sr. No	Test Name	Page No.
1	Some Basic Concepts of Chemistry	1
2	Structure of Atom	5
3	Classification of Elements and Periodicity in Properties	9
4	Chemical Bonding and Molecular Structure	13
	<b>Revision Test 01</b>	18
5	Organic Chemistry - Some Basic Principles and Techniques	22
6	Hydrocarbons – Alkanes, Alkenes and Alkynes	26
7	Aromatic hydrocarbons	31
	<b>Revision Test 02</b>	36
8	Solutions	41
9	p-Block Elements	46
10	d and f-Block Elements	50
	<b>Revision Test 03</b>	54
11	Haloalkanes and Haloarenes	58
12	Alcohols, Phenols and Ethers	64
13	Aldehydes, Ketones and Carboxylic Acids	69
	<b>Revision Test 04</b>	75
14	Redox Reactions	81
15	Electrochemistry	86
16	Coordination Compounds	91
	<b>Revision Test 05</b>	95
17	Thermodynamics	99
18	Equilibrium	104
19	Chemical Kinetics	108
	<b>Revision Test 06</b>	113
20	Organic Compounds Containing Nitrogen	118
21	Biomolecules	123
22	Principles related to Practical chemistry	128
	<b>Revision Test 07</b>	132
	Model Test Paper 01	138
	Model Test Paper 02	143
	Model Test Paper 03	148
	Model Test Paper 04	152
	Model Test Paper 05	157
	Answers and Solutions to MCQs	163

Time: 1 Hour

Total Marks: 200

- 0.6 g of carbon was burnt in air to form  $\text{CO}_2$ . The number of molecules of  $\text{CO}_2$  introduced into the air will be \_\_\_\_\_.  
(A)  $6.02 \times 10^{22}$  (B)  $3.01 \times 10^{22}$   
(C)  $6.02 \times 10^{23}$  (D)  $3.01 \times 10^{23}$
- The time taken (in hours) to distribute one Avogadro number of wheat grains if  $10^{20}$  grains are distributed each second?  
(A) 0.1673 (B) 1.673  
(C) 16.73 (D) 167.3
- The amount of HCl in gastric juice is about 3.0 g per litre. If a person produces 2.5 litre of gastric juice per day then the number of antacid tablets each containing 300 mg of  $\text{Al}(\text{OH})_3$  needed to neutralize the HCl produced in one day is approximately \_\_\_\_\_.  
(Atomic mass of Al = 27, Cl = 35.5, O = 16, H = 1)  
(A) 12 (B) 15 (C) 18 (D) 25
- In the reaction,  
 $2\text{Al}_{(s)} + 6\text{HCl}_{(aq)} \longrightarrow 2\text{Al}_{(aq)}^{3+} + 6\text{Cl}_{(aq)}^- + 3\text{H}_{2(g)}$ ,  
\_\_\_\_\_.  
(A) 6 L  $\text{HCl}_{(aq)}$  is consumed for every 3L  $\text{H}_{2(g)}$  produced  
(B) 33.6 L  $\text{H}_{2(g)}$  is produced regardless of temperature and pressure for every mole of Al that reacts  
(C) 67.2 L  $\text{H}_{2(g)}$  at STP is produced for every mole of Al that reacts  
(D) 11.2 L  $\text{H}_{2(g)}$  at STP is produced for every mole of  $\text{HCl}_{(aq)}$  consumed
- A sample of hydrated barium chloride weighing 61 g was heated until all the water of hydration is removed. The weight of dried sample was found to be 52 g. What is the formula of the hydrated salt? (Atomic mass of Ba = 137, Cl = 35.5)  
(A)  $\text{BaCl}_2 \cdot \text{H}_2\text{O}$  (B)  $\text{BaCl}_2 \cdot 2\text{H}_2\text{O}$   
(C)  $\text{BaCl}_2 \cdot 3\text{H}_2\text{O}$  (D)  $\text{BaCl}_2 \cdot 4\text{H}_2\text{O}$
- Which of the following statements about a compound is INCORRECT?  
(A) A molecule of a compound has atoms of different elements.  
(B) A compound cannot be separated into its constituent elements by physical methods of separation.  
(C) A compound retains the physical properties of its constituent elements.  
(D) The ratio of atoms of different elements in a compound is fixed.

- If 1.5 moles of oxygen combine with Al to form  $\text{Al}_2\text{O}_3$ , the mass of Al used in the reaction is \_\_\_\_\_ g. [Atomic mass of Al = 27]  
(A) 2.7 (B) 54  
(C) 27 (D) 108

- Match List - I with List - II:

List - I		List - II	
i.	Number of molecules	a.	$\frac{\text{Molarity}}{\text{Valency}}$
ii.	Molecular formula	b.	Valency $\times$ molarity
iii.	Normality	c.	$n \times$ Empirical formula
		d.	$n \times$ Avogadro number ( $N_A$ )

Choose the CORRECT answer from the options given below:

- (A) i - a, ii - c, iii - d  
(B) i - d, ii - c, iii - b  
(C) i - b, ii - d, iii - a  
(D) i - b, ii - c, iii - a
- If temperature ( $X^\circ$ ) of a substance is same when expressed in  $^\circ\text{F}$  and  $^\circ\text{C}$ , then the value of  $X^\circ$  will be \_\_\_\_\_.  
(A)  $180^\circ$  (B)  $-273^\circ$   
(C)  $-40^\circ$  (D)  $-32^\circ$
- An organic compound made up of C, H and N contains 20% nitrogen. What will be its molar mass in gram if it contains only one nitrogen atom per molecule of the compound?  
(A) 70 (B) 140 (C) 100 (D) 65
- The amount of sodium sulphate formed when 1 L of 0.1 M sulphuric acid is allowed to react with 1 L of 0.1 M sodium hydroxide is \_\_\_\_\_.  
(A) 7.10 g (B) 3.55 g  
(C) 28.4 g (D) 142 g
- The volume occupied by 2 g of the gas at STP having vapour density 11.2 is \_\_\_\_\_.  
(A) 2 L (B) 4 L  
(C) 11.2 L (D) 22.4 L
- Excess of carbon dioxide is passed through 50 mL of 0.5 M calcium hydroxide solution. After the completion of the reaction, the solution was evaporated to dryness. The solid calcium carbonate was completely neutralized with 0.1 M hydrochloric acid. What will be the volume of hydrochloric acid required for complete neutralization of  $\text{CaCO}_3$ ?  
(Atomic mass of Ca = 40)  
(A) 200 mL (B) 300 mL  
(C) 400 mL (D) 500 mL



14. One mole of any substance contains  $6.022 \times 10^{23}$  atoms/molecules. Number of molecules of  $\text{H}_2\text{SO}_4$  present in 100 mL of 0.02 M  $\text{H}_2\text{SO}_4$  solution is \_\_\_\_\_.
- (A)  $12.044 \times 10^{20}$  (B)  $6.022 \times 10^{23}$   
(C)  $1 \times 10^{23}$  (D)  $12.044 \times 10^{23}$
15. The number of hydrogen atoms present in 8.5 g of  $\text{NH}_3$  is \_\_\_\_\_.
- (A)  $6.022 \times 10^{23}$  (B)  $5.31 \times 10^{-23}$   
(C)  $9.033 \times 10^{23}$  (D)  $3 \times 10^{23}$
16. What volume of hydrogen gas at 273 K and 1 atm pressure will be consumed in obtaining 21.6 g of elemental boron (atomic mass = 10.8) from the reduction of boron trichloride by hydrogen?
- (A) 67.2 L (B) 44.8 L  
(C) 22.4 L (D) 89.6 L
17. Given below are two statements: one is labelled as **Assertion A** and the other is labelled as **Reason R**:  
**Assertion A:** Law of multiple proportion cannot be applied to  $\text{Al}_2\text{O}_3$ .  
**Reason R:** Law of multiple proportion is only applied on binary compounds.  
In the light of the above statements, choose the CORRECT answer from the options given below:
- (A) Both **A** and **R** are true but **R** is NOT the correct explanation of **A**.  
(B) **A** is true but **R** is false.  
(C) **A** is false but **R** is true.  
(D) Both **A** and **R** are true and **R** is the correct explanation of **A**.
18.  $25 \text{ cm}^3$  of 0.2 M solution of a metal chloride ( $\text{MCl}_x$ ) react completely with  $150 \text{ cm}^3$  of 0.1 M  $\text{AgNO}_3$  solution to form the precipitate of  $\text{AgCl}$ . What is the formula of the metal chloride?
- (A)  $\text{MCl}$  (B)  $\text{MCl}_2$   
(C)  $\text{MCl}_3$  (D)  $\text{MCl}_4$
19. If isotopic distribution of C-12 and C-14 are 98% and 2% respectively, then what will be the number of C-14 atoms in 12 g of carbon?
- (A)  $1.032 \times 10^{22}$  (B)  $3.01 \times 10^{22}$   
(C)  $5.88 \times 10^{23}$  (D)  $6.022 \times 10^{23}$
20. 84 g of a gas occupies the same volume as 96 g of oxygen under similar conditions of temperature and pressure. The molecular weight of the gas is \_\_\_\_\_.
- (A) 36.5 g (B) 28 g  
(C) 14 g (D) 18.2 g
21. Select the CORRECT statements from the following:
- I. A molecule of a compound has atoms of different elements.  
II. A compound cannot be separated into its constituent elements by physical methods of separation.
- III. The ratio of atoms of different elements in a compound is fixed.  
IV. A compound retains the physical properties of its constituent elements.  
V. Compounds have definite, constant, elemental composition
- Choose the CORRECT answer from the options given below:
- (A) III, IV and V only  
(B) I and V only  
(C) I, II, III and V only  
(D) I, II and III only
22. Select the CORRECT statements from the following:
- I. Molarity of a solution depends on temperature.  
II. Molality of a solution depends on temperature.  
III. Mole fraction of a solution cannot be more than 1.
- Choose the CORRECT answer from the options given below:
- (A) I and II only (B) II and III only  
(C) I and III only (D) I, II and III
23. How many molecules are present in one gram of dihydrogen?
- (A)  $6.023 \times 10^{23}$  (B)  $3.011 \times 10^{23}$   
(C)  $2.512 \times 10^{23}$  (D)  $1.512 \times 10^{23}$
24. Volume of  $\text{CO}_2$  obtained on complete decomposition of 19.73 g of  $\text{BaCO}_3$  at STP is \_\_\_\_\_.
- (Atomic mass: Ba = 137.3, C = 12, O = 16)
- (A) 2.24 L (B) 1.12 L  
(C) 0.84 L (D) 0.56 L
25. The molecular mass and empirical formula of a compound are 180 g and  $\text{CH}_2\text{O}$  respectively. What will be the molecular formula of the compound?
- (A)  $\text{C}_9\text{H}_{18}\text{O}_9$  (B)  $\text{CH}_2\text{O}$   
(C)  $\text{C}_6\text{H}_{12}\text{O}_6$  (D)  $\text{C}_2\text{H}_4\text{O}_2$
26. The number of grams of oxygen in 0.10 mole of  $\text{Na}_2\text{CO}_3 \cdot 10\text{H}_2\text{O}$  is \_\_\_\_\_.
- (A) 13 g (B) 20.8 g  
(C) 18 g (D) 208 g
27. A compound with molar mass  $159 \text{ g mol}^{-1}$  contains 39.62% of copper, 40.25% of oxygen and  $x\%$  of an unknown element Y. If one molecule of the compound contains only one atom of Y, then the chemical symbol and the atomic mass of the element Y are \_\_\_\_\_ respectively.
- (A) Si, 28.0 u (B) S, 32.0 u  
(C) Cl, 35.5 u (D) C, 12.0 u
28. If 25 g of  $\text{XCl}_4$  contains 0.5 mole of chlorine, then its molecular mass is \_\_\_\_\_  $\text{g mol}^{-1}$ .
- (A) 1000 (B) 200  
(C) 150 (D) 400



29. The maximum volume of 0.25 M HCl which can be made by using one litre of 0.15 M HCl and one litre of 0.40 M HCl without adding water is \_\_\_\_\_. [Assume that volumes are additive.]  
(A) 2 L (B) 2.2 L  
(C) 1.667 L (D) 0.55 L
30. What is the mass of carbon dioxide which contains the same number of molecules as are present in 40 g of oxygen?  
(A) 40 g (B) 55 g  
(C) 32 g (D) 44 g
31. If an iodized salt contains 1% KI and a person consumes 2 g of the salt everyday, then number of iodide ions going into his body everyday would be \_\_\_\_\_. (Atomic mass of K = 39, I = 127)  
(A)  $3.6 \times 10^{21}$  (B)  $7.2 \times 10^{19}$   
(C)  $7.2 \times 10^{21}$  (D)  $9.5 \times 10^{19}$
32. Amount of  $\text{NO}_{(g)}$  formed in grams by oxidation of 1 mole of  $\text{NH}_{3(g)}$  by 1 mole of  $\text{O}_{2(g)}$  is \_\_\_\_\_.  
(A) 30.0 g (B) 54.0 g  
(C) 60.0 g (D) 24.0 g
33. A mixture of gases contains  $\text{H}_2$  and  $\text{O}_2$  gases in the ratio of 1 : 4 (w/w). What is the molar ratio of the  $\text{H}_2$  and  $\text{O}_2$  gases in the mixture?  
(A) 16 : 1 (B) 2 : 1 (C) 1 : 4 (D) 4 : 1
34. Given below are two statements:  
**Statement I:** Dalton assumed that molecules are the smallest particles of a compound.  
**Statement II:** According to Dalton's Atomic theory, atoms are indivisible, due to transformation, it cannot be created or destroyed but Uranium ( ${}_{92}\text{U}^{235}$ ) can be converted into Plutonium ( ${}_{94}\text{Pu}^{239}$ ) through interaction with neutrons  
In the light of the above statements, choose the CORRECT answer from the options given below:  
(A) Both **Statement I** and **Statement II** are false.  
(B) **Statement I** is correct but **Statement II** is false.  
(C) **Statement I** is incorrect but **Statement II** is true.  
(D) Both **Statement I** and **Statement II** are true.
35. A mixture of NaI and NaCl on reaction with  $\text{H}_2\text{SO}_4$  gave  $\text{Na}_2\text{SO}_4$  equal to the weight of original mixture taken. The mass percentage of NaI in the original mixture is \_\_\_\_\_. (Atomic weight of Na = 23, I = 127, S = 32, Cl = 35.5, O = 16)  
(A) 15.38 (B) 28.38  
(C) 62.38 (D) 82.38
36. The number of molecules in 8.96 L of a gas at  $0^\circ\text{C}$  and 1 atmospheric pressure is approximately \_\_\_\_\_.  
(A)  $6.022 \times 10^{23}$  (B)  $12.04 \times 10^{23}$   
(C)  $18.06 \times 10^{23}$  (D)  $24.09 \times 10^{22}$
37. Two samples of a compound of hydrogen and oxygen obtained by two different processes were analysed. One sample contained 0.2 g of hydrogen and 3.2 g of oxygen. The other sample contained 5.88 % hydrogen and 94.12 % oxygen. The experimental data obtained \_\_\_\_\_.  
(A) supports law of conservation of mass  
(B) supports law of definite proportions  
(C) does not support law of definite proportions  
(D) shows that the composition of elements present are different for both the samples
38. A gaseous hydrocarbon upon combustion gives 0.72 g of water and 3.08 g of  $\text{CO}_2$ . The empirical formula of the hydrocarbon is \_\_\_\_\_.  
(A)  $\text{C}_2\text{H}_4$  (B)  $\text{C}_7\text{H}_4$  (C)  $\text{C}_6\text{H}_5$  (D)  $\text{C}_7\text{H}_8$
39. Given below are two statements:  
**Statement I:** Empirical formula tells about percentage of various elements in a compound.  
**Statement II:** Molar mass can be determined from empirical formula.  
In the light of the above statements, choose the CORRECT answer from the options given below:  
(A) Both **Statement I** and **Statement II** are false.  
(B) **Statement I** is correct but **Statement II** is false.  
(C) **Statement I** is incorrect but **Statement II** is true.  
(D) Both **Statement I** and **Statement II** are true.
40. The element whose atom has mass of  $10.86 \times 10^{-26}$  kg is \_\_\_\_\_.  
(A) boron (B) calcium  
(C) silver (D) zinc
41. Given below are two statements: One is labelled as **Assertion (A)** and the other is labelled as **Reason R** :  
**Assertion (A)** : The law of definite composition is true for only those compounds which are obtained from one type of isotope.  
**Reason R** : Isotopic composition varies from place to place.  
In the light of the above statements, choose the CORRECT answer from the options given below.  
(A) Both **A** & **R** are true but **R** is not the correct explanation of **A**.  
(B) **A** is true but **R** is false.  
(C) **A** is false but **R** is true.  
(D) Both **A** & **R** are true and **R** is the correct explanation of **A**.





## 42. Match List - I with List - II:

List - I		List - II	
i.	CO & CO <sub>2</sub>	a.	Law of constant composition.
ii.	NaH, HCl, NaCl	b.	Law of conservation of mass.
iii.	27.27% of Carbon & 72.73% of Oxygen.	c.	Law of multiple proportions.
iv.	12 g of C + 32 g of O → 44 g of CO <sub>2</sub>	d.	Law of reciprocal proportions.

Choose the CORRECT answer from the options given below :

- (A) i - c, ii - d, iii - a, iv - b  
 (B) i - d, ii - c, iii - b, iv - a  
 (C) i - a, ii - c, iii - d, iv - b  
 (D) i - b, ii - a, iii - d, iv - c
43. 81.4 g sample of ethyl alcohol contains 0.002 g of water. The amount of pure ethyl alcohol present in the sample upto the proper number of significant figures is \_\_\_\_\_.
- (A) 81.4 g (B) 71.40 g  
 (C) 81.398 g (D) 81 g
44. Total number of electrons in 1 mole of CO<sub>2</sub> (in terms of N<sub>A</sub>) is \_\_\_\_\_.
- (A) 3N<sub>A</sub> (B) N<sub>A</sub>  
 (C) 16N<sub>A</sub> (D) 22N<sub>A</sub>
45. The average molar mass of a mixture of methane and ethene present in the ratio of a:b is found to be 20 g mol<sup>-1</sup>. What would be the average molar mass of the mixture if ratio were reversed?
- (A) 24 g mol<sup>-1</sup> (B) 26 g mol<sup>-1</sup>  
 (C) 28 g mol<sup>-1</sup> (D) 30 g mol<sup>-1</sup>
46. Equal masses of H<sub>2</sub>, O<sub>2</sub> and CH<sub>4</sub> have been taken in a container of volume (V) at temperature 27 °C in identical conditions. The ratio of the volumes of gases H<sub>2</sub> : O<sub>2</sub> : CH<sub>4</sub> would be \_\_\_\_\_.
- (A) 8 : 16 : 1 (B) 16 : 8 : 1  
 (C) 16 : 1 : 2 (D) 8 : 1 : 2
47. The amount of NH<sub>3(g)</sub> formed on mixing 20.0 kg of N<sub>2(g)</sub> and 3.0 kg of H<sub>2(g)</sub> is \_\_\_\_\_.
- (A) 17 kg (B) 34 kg  
 (C) 20 kg (D) 23 kg
48. Two oxides of a metal 'M' contain 36.4% and 53.4% of oxygen by mass respectively. If formula of first oxide is M<sub>2</sub>O, then what will be the formula of second oxide?
- (A) MO (B) M<sub>2</sub>O<sub>3</sub>  
 (C) MO<sub>2</sub> (D) M<sub>2</sub>O<sub>5</sub>

49. If Avogadro number N<sub>A</sub> is changed from 6.022 × 10<sup>23</sup> mol<sup>-1</sup> to 6.022 × 10<sup>20</sup> mol<sup>-1</sup>, then this would change \_\_\_\_\_.
- (A) the definition of mass in units of grams  
 (B) the mass of one mole of carbon  
 (C) the ratio of chemical species to each other in balanced equation  
 (D) the ratio of elements to each other in a compound
50. Which of the following contains maximum number of molecules?
- (A) 34 g of water (B) 28 g of CO<sub>2</sub>  
 (C) 46 g of CH<sub>3</sub>OH (D) 54 g of N<sub>2</sub>O<sub>5</sub>

Page no. 5 to 17 are purposely left blank.

To see complete chapter buy **Target Notes** or **Target E-Notes**

Time: 1 Hour

Total Marks: 200

- The ionization energy of a single electron species is 217.6 eV. The number of proton in the species is \_\_\_\_\_.  
(A) 3 (B) 4  
(C) 5 (D) 16
- The density of a liquid is 1.2 g/mL. If there are 35 drops in 2 mL of liquid, then the number of molecules in 1 drop of liquid is \_\_\_\_\_. (Molecular weight of liquid = 70 g mol<sup>-1</sup>)  
(A)  $\frac{1.2}{35} \times 6.022 \times 10^{23}$   
(B)  $\left(\frac{1.2}{35}\right)^2 \times 6.022 \times 10^{23}$   
(C)  $\frac{1.2}{(35)^2} \times 6.022 \times 10^{23}$   
(D)  $1.2 \times 6.022 \times 10^{23}$
- The circumference of second Bohr's orbit of hydrogen atom is \_\_\_\_\_ the circumference of second Bohr's orbit of He<sup>+</sup>.  
(A) twice (B) half  
(C) thrice (D) equal to
- For which of the following element, the value of principal quantum number (n) for the valence shell is 5?  
(A) Si (Z = 14) (B) S (Z = 16)  
(C) Cs (Z = 55) (D) Sr (Z = 38)
- The average vapour density of a mixture of NO<sub>2</sub> and N<sub>2</sub>O<sub>4</sub> is 38.3 at 300 K. The number of moles of NO<sub>2</sub> in 100 g of the mixture is \_\_\_\_\_.  
(A) 0.218 (B) 0.437  
(C) 1.736 (D) 0.868
- If the energy of an electron of hydrogen atom in the second Bohr's orbit is -3.4 eV. What will be the energy of an electron in the fourth Bohr's orbit?  
(A) -0.85 eV (B) -13.6 eV  
(C) -6.8 eV (D) -54.4 eV
- C<sub>8</sub>H<sub>7</sub>SO<sub>3</sub>Na (Molecular weight = 206 g mol<sup>-1</sup>) is the commercial resin used for exchanging ions in water softening. The maximum uptake of Ca<sup>2+</sup> ions by the resin expressed in mole per gram resin is \_\_\_\_\_.  
(A)  $\frac{1}{103}$  (B)  $\frac{1}{206}$   
(C)  $\frac{2}{309}$  (D)  $\frac{1}{412}$
- In a hydrogen atom, the energy emitted by an electron when it jumps from n = 2 to n = 1 is \_\_\_\_\_ the energy emitted when it jumps from n = 3 to n = 2.  
(A) 0.18 times (B) 5.4 times  
(C) equal to (D) twice
- The radii of the anions (in Å) N<sup>3-</sup>, O<sup>2-</sup> and F<sup>-</sup> respectively are \_\_\_\_\_.  
(A) 1.36, 1.40 and 1.71  
(B) 1.36, 1.71 and 1.40  
(C) 1.71, 1.40 and 1.36  
(D) 1.71, 1.36 and 1.40
- In the reaction, 4NH<sub>3(g)</sub> + 5O<sub>2(g)</sub> → 4NO<sub>(g)</sub> + 6H<sub>2</sub>O<sub>(l)</sub> when 1 mole of ammonia and 1 mole of O<sub>2</sub> are made to react to completion, then it will lead to \_\_\_\_\_.  
(A) consumption of all the oxygen  
(B) formation of 1.0 mole of NO  
(C) formation of 1.0 mole of H<sub>2</sub>O  
(D) consumption of all ammonia
- If uncertainty in momentum and position are equal, then the uncertainty in velocity will be greater than or equal to \_\_\_\_\_.  
(A)  $\frac{1}{2}\sqrt{\frac{h}{\pi}}$  (B)  $\frac{1}{2}\sqrt{\frac{h}{m\pi}}$   
(C)  $\frac{1}{2m}\sqrt{\frac{h}{\pi}}$  (D)  $\sqrt{\frac{h}{\pi}}$
- The empirical formula of an organic compound containing only carbon and hydrogen is CH<sub>2</sub>. Under identical conditions of temperature and pressure, the mass of one litre of this organic gas is exactly equal to that of one litre of N<sub>2</sub>. Therefore, the molecular formula of the organic gas will be \_\_\_\_\_.  
(A) C<sub>2</sub>H<sub>4</sub> (B) C<sub>3</sub>H<sub>6</sub>  
(C) C<sub>6</sub>H<sub>12</sub> (D) C<sub>4</sub>H<sub>8</sub>
- Which of the following particles will have the longest wavelength if the velocity of all the given particles is equal?  
(A) Electron (B) Proton  
(C) Neutron (D) Alpha particle
- An unknown chlorohydrocarbon contains 3.55% of chlorine. If each molecule of the hydrocarbon contains only one chlorine atom, then the number of chlorine atoms present in 1 g of chlorohydrocarbon are \_\_\_\_\_. (Atomic weight of Cl = 35.5 g)  
(A)  $6.022 \times 10^9$  (B)  $6.022 \times 10^{20}$   
(C)  $6.022 \times 10^{21}$  (D)  $6.022 \times 10^{23}$



15. Which among the following elements have lowest value of first ionization enthalpy ( $IE_1$ )?  
(A) Pb (B) Sn  
(C) Si (D) C
16. A 5.82 g silver coin is dissolved in nitric acid. When sodium chloride is added to the solution, all the silver is precipitated as AgCl. The AgCl precipitate weighs 7.20 g. The mass percentage of silver in the coin is \_\_\_\_\_.  
(A) 60.3% (B) 80.4%  
(C) 93.1% (D) 70%
17. The INCORRECT statement is \_\_\_\_\_.  
(A) Each element has a unique line emission spectrum.  
(B) The Paschen series of lines in the hydrogen spectrum appear in the visible region of the electromagnetic spectrum.  
(C) Bohr's theory could not explain the splitting of spectral lines in the presence of magnetic or electric field.  
(D) The emission spectra of atoms in the gas phase show bright lines of specific wavelengths with dark spaces between them.
18. 25 cm<sup>3</sup> of oxalic acid completely neutralises 0.064 g of sodium hydroxide. Molarity of oxalic acid solution is \_\_\_\_\_.  
(A) 0.064 M (B) 0.045 M  
(C) 0.015 M (D) 0.032 M
19. In which of the following sets, the first element has higher value of electronegativity than the second element?
- | Set | First element | Second element |
|-----|---------------|----------------|
| I   | Potassium     | Lithium        |
| II  | Lithium       | Boron          |
| III | Oxygen        | Carbon         |
| IV  | Sulphur       | Silicon        |
- (A) I and II (B) I and III  
(C) III and IV (D) I, II and IV
20. Which of the following gases will occupy least volume if 20 g of each gas is taken at same temperature and pressure?  
(A) CO<sub>2</sub> (B) N<sub>2</sub>  
(C) CH<sub>4</sub> (D) HCl
21. 30 mL of a gaseous hydrocarbon requires 90 mL of oxygen for complete combustion at STP. In the process, 60 mL of CO<sub>2</sub> is formed. The molecular formula of the hydrocarbon is \_\_\_\_\_.  
(A) CH<sub>4</sub> (B) C<sub>2</sub>H<sub>2</sub>  
(C) C<sub>2</sub>H<sub>4</sub> (D) C<sub>2</sub>H<sub>6</sub>
22. The four sets of quantum number for an electron in the outermost shell of sodium is given as \_\_\_\_\_.  
(A)  $n = 4, l = 0, m = 0, s = \pm \frac{1}{2}$   
(B)  $n = 3, l = 1, m = +1, s = \pm \frac{1}{2}$   
(C)  $n = 4, l = 0, m = +1, s = \pm \frac{1}{2}$   
(D)  $n = 3, l = 0, m = 0, s = \pm \frac{1}{2}$
23. Dot mark (.) made by lead pencil on the paper is 10<sup>-18</sup> g. The number of atoms of the element (by which pencil is made) present in one dot mark is \_\_\_\_\_.  
(A)  $2.92 \times 10^7$  (B)  $5.02 \times 10^4$   
(C)  $6.02 \times 10^6$  (D)  $6.02 \times 10^{23}$
24. Which of the following is the ion with the smallest ionic radius?  
(A) K<sup>+</sup> (B) Ca<sup>2+</sup>  
(C) Ti<sup>3+</sup> (D) Ti<sup>4+</sup>
25. The density of 29.2 % (W/W) HCl stock solution is 1.25 g mL<sup>-1</sup>. The volume (mL) of stock solution required to prepare a 200 mL solution of 0.4 M HCl is \_\_\_\_\_.  
(The molecular weight of HCl = 36.5 g mol<sup>-1</sup>)  
(A) 5 mL (B) 8 mL  
(C) 10 mL (D) 15 mL
26. Select the CORRECT statements from the following:  
I. Be<sub>2</sub> does not exist.  
II. O<sub>2</sub>, O<sub>2</sub><sup>-</sup>, O<sub>2</sub><sup>+</sup> are all paramagnetic  
III. N<sub>2</sub><sup>+</sup> is diamagnetic  
IV. Bond strength of N<sub>2</sub> is maximum amongst the homonuclear diatomic molecules belonging to the second period.  
Choose the CORRECT answer from the options given below:  
(A) III and IV only  
(B) II and IV only  
(C) I, II, and III only  
(D) I, II and IV only
27. The ionization energy of gaseous sodium is 495.80 kJ mol<sup>-1</sup>. The minimum frequency which can ionize sodium is \_\_\_\_\_.  
 $\text{Na}_{(g)} \longrightarrow \text{Na}_{(g)}^+ + e^-$   
(A)  $7.48 \times 10^{-30}$  Hz  
(B)  $1.24 \times 10^{15}$  Hz  
(C)  $1.24 \times 10^{18}$  Hz  
(D)  $8.23 \times 10^{-19}$  Hz



## 28. Match List - I with List - II:

List - I		List - II	
i.	B <sub>2</sub>	a.	Diamagnetic
ii.	SO <sub>2</sub>	b.	Angular/Bent
iii.	No resonance	c.	N <sub>2</sub> H <sub>4</sub>
iv.	C <sub>2</sub>	d.	Paramagnetic

Choose the CORRECT answer from the options given below:

- (A) i - b, ii - d, iii - a, iv - c  
 (B) i - d, ii - b, iii - c, iv - a  
 (C) i - a, ii - c, iii - d, iv - b  
 (D) i - b, ii - a, iii - d, iv - c

## 29. In Bohr's model of hydrogen atom, if the radius of first orbit is X, then the wavelength of an electron in the second orbit will be \_\_\_\_\_.

- (A) 2πX (B) 4πX  
 (C) 6πX (D) 9πX

## 30. Match List - I with List - II:

Molecule		Bond order	
i.	F <sub>2</sub> and O <sub>2</sub> <sup>2-</sup>	a.	3
ii.	N <sub>2</sub> , CO and NO <sup>+</sup>	b.	2
iii.	O <sub>2</sub>	c.	1
		d.	2.5

Choose the CORRECT answer from the options given below:

- (A) i - b, ii - d, iii - a  
 (B) i - c, ii - a, iii - b  
 (C) i - a, ii - c, iii - d  
 (D) i - b, ii - a, iii - d

## 31. The atomic number of an element is 31. Which of the following statements is INCORRECT with respect to this element?

- (A) It has one electron in its 4p orbital.  
 (B) It is a metal.  
 (C) It is a d-block element.  
 (D) It belongs to period 4.

32. Suppose elements X and Y combine to form two compounds, XY<sub>2</sub> and X<sub>3</sub>Y<sub>2</sub>. When 0.1 mole of XY<sub>2</sub> weighs 10 g and 0.05 mole of X<sub>3</sub>Y<sub>2</sub> weighs 9 g, the atomic weights of X and Y are respectively \_\_\_\_\_.

- (A) 30, 20 (B) 40, 30  
 (C) 60, 40 (D) 20, 30

## 33. For which of the following orbitals the number of spherical nodes is NOT equal to zero?

- (A) 4f (B) 3d  
 (C) 3s (D) 2p

## 34. Consider proton and electron, both moving with equal velocity. The wavelength ratio of proton to electron is \_\_\_\_\_.

- (A) 1 : 2 (B) 2 : 1  
 (C) 1836 : 1 (D) 1 : 1836

## 35. The ground state electronic configuration and the atomic number of an element placed in group 10 and period 4 of modern periodic table are \_\_\_\_\_ respectively.

- (A) [Ar] 4s<sup>2</sup> 3d<sup>8</sup>; 28  
 (B) [Ar] 4s<sup>2</sup> 3d<sup>7</sup>; 27  
 (C) [Ar] 4s<sup>1</sup> 3d<sup>10</sup>; 29  
 (D) [Ar] 4s<sup>2</sup> 3d<sup>10</sup>; 30

36. The amount of arsenic pentasulphide (As<sub>2</sub>S<sub>5</sub>) that can be obtained when 35.5 g of arsenic acid (H<sub>3</sub>AsO<sub>4</sub>) is treated with excess H<sub>2</sub>S in the presence of conc. HCl (assuming 100% conversion) is \_\_\_\_\_.

- (Atomic mass of As = 75, S = 32, O = 16)  
 (A) 0.25 mol (B) 0.50 mol  
 (C) 0.125 mol (D) 0.333 mol

## 37. Which of the following is the CORRECT set of quantum numbers for the electron occupying the highest energy orbital in Ar atom in first excited state?

- (A) n = 4, l = 1, m = 1, s = ± $\frac{1}{2}$   
 (B) n = 3, l = 1, m = 1, s = ± $\frac{1}{2}$   
 (C) n = 4, l = 0, m = 0, s = ± $\frac{1}{2}$   
 (D) n = 3, l = 2, m = 2, s = ± $\frac{1}{2}$

38. Given below are two statements: one is labelled as **Assertion A** and the other is labelled as **Reason R**:

**Assertion A:** Dipole moment of NF<sub>3</sub> is less than that of NH<sub>3</sub>.

**Reason R:** In NH<sub>3</sub>, the orbital dipole due to the lone pair is in the same direction as the resultant dipole moment of N-H bonds, whereas in NF<sub>3</sub> the orbital dipole is in the direction opposite to the resultant dipole moment of three N-F bonds.

In the light of the above statements, choose the CORRECT answer from the options given below:

- (A) Both **A** and **R** are true but **R** is NOT the correct explanation of **A**.  
 (B) **A** is true but **R** is false.  
 (C) **A** is false but **R** is true.  
 (D) Both **A** and **R** are true and **R** is the correct explanation of **A**.

## 39. Select the CORRECT option.

- (A) Ionic radius of Na<sup>+</sup> > Atomic radius of Na  
 (B) Atomic radius of Mg > Ionic radius of Mg<sup>2+</sup>  
 (C) Atomic radius of F > Ionic radius of F<sup>-</sup>  
 (D) Ionic radius of Al<sup>3+</sup> > Atomic radius of Al



40. Given below are two statements: one is labelled as **Assertion A** and the other is labelled as **Reason R**:  
**Assertion:** In  $\text{PCl}_5$  molecule, axial bonds have been found to be slightly longer than the equatorial bonds.  
**Reason:** Axial bond pairs suffer more repulsive interaction from the equatorial bond pairs.  
In the light of the above statements, choose the CORRECT answer from the options given below:  
(A) Both **A** and **R** are true but **R** is NOT the correct explanation of **A**.  
(B) **A** is true but **R** is false.  
(C) **A** is false but **R** is true.  
(D) Both **A** and **R** are true and **R** is the correct explanation of **A**.
41. Select the CORRECT statements from the following:  
I. Orbitals having almost equal energy undergoes hybridization.  
II. Only half filled orbitals can participate in hybridization.  
III. Hybridized orbitals possess lower energy and lower stability.  
IV. Hybrid orbitals form  $\sigma$  bonds.  
V. Unhybridized orbitals form  $\pi$  bonds.  
Choose the CORRECT answer from the options given below:  
(A) IV and V only  
(B) III and IV only  
(C) I, II, and III only  
(D) I, IV and V only
42. If  $10^{21}$  molecules are removed from 200 mg of  $\text{CO}_2$ , then the number of moles of  $\text{CO}_2$  left are \_\_\_\_\_.  
(A)  $2.89 \times 10^{-3}$  (B)  $28.8 \times 10^{-3}$   
(C)  $0.288 \times 10^{-3}$  (D)  $1.68 \times 10^{-2}$
43. The ratio of wavelengths of electron in two Bohr's orbits is 2 : 3. The ratio of their kinetic energy is \_\_\_\_\_.  
(A) 9 : 4 (B) 4 : 9  
(C) 2 : 3 (D) 3 : 2
44. Given below are two statements:  
**Statement I:** Greater is the decrease in energy in the formation of a bond, greater is the strength of the bond.  
**Statement II:** Covalent bond is not formed, if the magnitude of repulsive forces is less than the magnitude of attractive forces.  
In the light of the above statements, choose the CORRECT answer from the options given below:  
(A) Both **Statement I** and **Statement II** are false.  
(B) **Statement I** is correct but **Statement II** is false.  
(C) **Statement I** is incorrect but **Statement II** is true.  
(D) Both **Statement I** and **Statement II** are true.
45. According to Bohr's atomic model for hydrogen, which of the following is TRUE?  
(A) Frequency of revolution in orbit  $\propto \frac{Z}{n^2}$   
(B) Radius of  $n^{\text{th}}$  orbit  $\propto \frac{Z^2}{n}$   
(C) Frequency of revolution in orbit  $\propto \frac{Z^2}{n^3}$   
(D) Radius of  $n^{\text{th}}$  orbit  $\propto \frac{Z^2}{n^2}$
46. Given below are two statements:  
**Statement I:** Molecular geometry of  $\text{ICl}_5$  is square pyramidal while that of  $\text{ICl}_4^-$  is square planar.  
**Statement II:**  $\text{ICl}_5$  and  $\text{ICl}_4^-$  are isostructural  
In the light of the above statements, choose the CORRECT answer from the options given below:  
(A) Both **Statement I** and **Statement II** are false.  
(B) **Statement I** is correct but **Statement II** is false.  
(C) **Statement I** is incorrect but **Statement II** is true.  
(D) Both **Statement I** and **Statement II** are true.
47. In photoelectric effect for a particular metal, the square of velocity of ejected electron is directly proportional to \_\_\_\_\_.  
(A) intensity of incident beam  
(B) frequency of incident beam  
(C) wavelength of incident beam  
(D) none of these
48. Which of the following metals requires radiation of highest frequency to cause emission of electron?  
(A) Na (B) Mg  
(C) K (D) Ca
49. The quantum numbers for electrons are given as,  
i.  $n = 4, l = 1$  ii.  $n = 4, l = 0$   
iii.  $n = 3, l = 2$  iv.  $n = 3, l = 1$   
The CORRECT order of increasing energy is \_\_\_\_\_.  
(A) iii < i < iv < ii (B) iv < ii < iii < i  
(C) iv < iii < ii < i (D) ii < iv < i < iii
50. Which of the following electronic transitions emits energy in the form of electromagnetic radiation?  
(A)  $n = 3$  to  $n = 4$  (B)  $n = 5$  to  $n = \infty$   
(C)  $n = 1$  to  $n = \infty$  (D)  $n = 2$  to  $n = 1$

Page no. **22** to 137 are purposely left blank.

To see complete chapter buy **Target Notes** or **Target E-Notes**

# Model Test Paper - 01

Time: 45 min

Total Marks: 180

**Note:** In section A, all questions are compulsory.

In section B, student needs to attend any 10 questions out of 15 questions.

## Section A

1. 1.0 M aqueous solution of urea is isotonic with \_\_\_\_\_.

- (A) 0.5 M NaCl aqueous solution  
 (B) 0.5 M sugar aqueous solution  
 (C) 0.5 M BaCl<sub>2</sub> aqueous solution  
 (D) 1.0 M solution benzoic acid in benzene

2. Match List - I with List - II:

List - I		List - II	
i.	n-Butane and 2-Methylpropane	a.	Functional group isomerism
ii.	2-Hydroxypropanal and 3-Hydroxypropanal	b.	Metamerism
iii.	Methyl cyanide and Methyl isocyanide	c.	Chain isomerism
iv.	Dimethylpropylamine and Diethylmethylamine	d.	Position isomerism

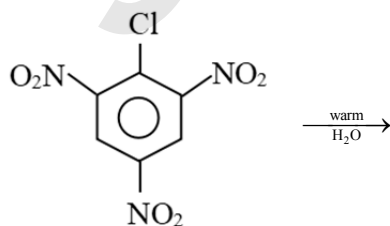
Choose the CORRECT answer from the options given below:

- (A) i - d, ii - a, iii - b, iv - c  
 (B) i - c, ii - a, iii - d, iv - b  
 (C) i - c, ii - d, iii - a, iv - b  
 (D) i - b, ii - d, iii - a, iv - c

3. The cell constant of 0.02 M NaCl solution at 298 K is 2 cm<sup>-1</sup> and its resistance is 400 Ω. The equivalent conductance is \_\_\_\_\_.

- (A) 5 × 10<sup>2</sup> Ω<sup>-1</sup> cm<sup>2</sup> eq<sup>-1</sup> (B) 25 × 10<sup>2</sup> Ω<sup>-1</sup> cm<sup>2</sup> eq<sup>-1</sup>  
 (C) 2.5 × 10<sup>2</sup> Ω<sup>-1</sup> cm<sup>2</sup> eq<sup>-1</sup> (D) 8 × 10<sup>4</sup> Ω<sup>-1</sup> cm<sup>2</sup> eq<sup>-1</sup>

4. What is product of the following reaction?



- (A) Picric acid  
 (B) p-Nitrophenol  
 (C) 2,4-Dinitrophenol  
 (D) 1-Chloro-2-nitrobenzene

5. Order and molecularity are determined \_\_\_\_\_.  
 (A) experimentally and theoretically, respectively  
 (B) theoretically and experimentally, respectively  
 (C) experimentally only  
 (D) theoretically only

6. Which of the following statements regarding chemical equilibrium is INCORRECT?

- (A) An equilibrium can be shifted by altering the temperature or pressure.  
 (B) At equilibrium, the concentrations of reactants and products reach constant values.  
 (C) The same state of equilibrium is reached whether one starts with the reactants or the products.  
 (D) The forward reaction is favoured by the addition of a catalyst.

7. In a process, 238 J of work is done on the system and 54 J of heat is evolved. The internal energy of the system during the process \_\_\_\_\_.

- (A) increases by 54 J  
 (B) decreases by 184 J  
 (C) increases by 184 J  
 (D) increases by 292 J

8. What is the correct increasing order of energy of the orbitals of hydrogen atom ?

- (A) 1s < 2s < 3s < 2p < 4p = 4d = 4f  
 (B) 1s < 2s = 2p < 3s = 3p = 3d < 4s = 4p = 4d = 4f  
 (C) 1s < 2s < 2p < 3s = 3p = 3d < 4s < 4p < 4d < 4f  
 (D) 1s < 2s < 2p < 3s < 3p < 3d < 4s < 4p < 4d < 4f

9. For the following three reactions (i), (ii) and (iii), equilibrium constants are given as K<sub>1</sub>, K<sub>2</sub> and K<sub>3</sub> respectively.

- i. CO<sub>(g)</sub> + H<sub>2</sub>O<sub>(g)</sub> ⇌ CO<sub>2(g)</sub> + H<sub>2(g)</sub>; K<sub>1</sub>  
 ii. CH<sub>4(g)</sub> + H<sub>2</sub>O<sub>(g)</sub> ⇌ CO<sub>(g)</sub> + 3H<sub>2(g)</sub>; K<sub>2</sub>  
 iii. CH<sub>4(g)</sub> + 2H<sub>2</sub>O<sub>(g)</sub> ⇌ CO<sub>2(g)</sub> + 4H<sub>2(g)</sub>; K<sub>3</sub>

Which of the following relations is CORRECT?

- (A) K<sub>3</sub>K<sub>2</sub><sup>3</sup> = K<sub>1</sub><sup>2</sup> (B) K<sub>1</sub>√K<sub>2</sub> = K<sub>3</sub>  
 (C) K<sub>2</sub>K<sub>3</sub> = K<sub>1</sub> (D) K<sub>3</sub> = K<sub>1</sub>K<sub>2</sub>

10. The polarising power of the anions, N<sup>3-</sup>, O<sup>2-</sup> and F<sup>-</sup>, follows the order \_\_\_\_\_.

- (A) N<sup>3-</sup> > F<sup>-</sup> > O<sup>2-</sup> (B) O<sup>2-</sup> > N<sup>3-</sup> > F<sup>-</sup>  
 (C) O<sup>2-</sup> > F<sup>-</sup> > N<sup>3-</sup> (D) N<sup>3-</sup> > O<sup>2-</sup> > F<sup>-</sup>





11. For a spontaneous reaction, Gibbs free energy change ( $\Delta G$ ) and equilibrium constant ( $K$ ) will be \_\_\_\_\_, respectively.  
(A) negative,  $> 1$  (B) positive,  $> 1$   
(C) positive,  $< 1$  (D) negative,  $= 1$

12. Match List - I with List - II:

List - I		List - II	
i.	Rate = $K[A]^1[B]^3$	a.	Pseudo first order reactions
ii.	Hydrogenation of ethene	b.	Second order reaction
iii.	Hydrolysis of ester	c.	Zero order reaction
iv.	Thermal decomposition of HI on gold surface.	d.	First order reaction

Choose the CORRECT answer from the options given below:

- (A) i - d, ii - a, iii - b, iv - c  
(B) i - c, ii - a, iii - d, iv - b  
(C) i - c, ii - d, iii - a, iv - b  
(D) i - b, ii - d, iii - a, iv - c
13. Which of the following statements is (are) INCORRECT for the modern periodic table.  
i. Periods are horizontal rows and groups are vertical columns.  
ii. Transition elements are placed in periods 4 to 7.  
iii. Inner-transition elements are placed in 6 and 7 periods  
iv. Elements with atomic numbers from 58 to 71 are called actinides and elements with atomic numbers from 90 to 103 are called lanthanides.  
(A) Both iii and iv (B) Both i and ii  
(C) Only iii (D) Only iv
14. Which statement is INCORRECT about LCAO?  
(A) Atomic orbitals of nearly same energy combine to form molecular orbitals.  
(B) Addition of atomic orbitals results in bonding molecular orbitals.  
(C) Antibonding molecular orbital has lower energy than combining atomic orbitals.  
(D) Each molecular orbital can accommodate maximum number of two electrons.
15. The velocity of an electron in Bohr's orbit is \_\_\_\_\_.  
(A)  $\frac{2\pi m r}{nh}$  (B)  $\frac{nh}{2\pi m r}$   
(C)  $\frac{2\pi r}{n}$  (D)  $\frac{Ze^2}{r}$
16. Which of the following statements is INCORRECT?  
(A) 1 mole is equal to  $6.022 \times 10^{23}$  particles.  
(B) The mass of 1 mole element is equal to its atomic mass in grams.

- (C) Molar mass is mass of one molecule.  
(D) None of these

17. The pressure of ethane over a saturated solution containing  $7.85 \times 10^{-2} \text{ mol L}^{-1}$  of ethane is 1 atm. If the solution contains  $5 \times 10^{-2} \text{ mol L}^{-1}$  of ethane, then what will be the partial pressure of the gas?  
(A) 0.234 atm (B) 0.387 atm  
(C) 0.437 atm (D) 0.637 atm
18. Given below are two statements:  
**Statement I:** Colour produced in phthalein dye test by Resorcinol is violet/blue.  
**Statement II:** Presence of carbonyl group is usually detected by 2,4 dinitrophenylhydrazine (2,4-DNP) test.  
In the light of the above statements, choose the CORRECT answer from the options given below:  
(A) Both **Statement I** and **Statement II** are false.  
(B) **Statement I** is correct but **Statement II** is false.  
(C) **Statement I** is incorrect but **Statement II** is true.  
(D) Both **Statement I** and **Statement II** are true.
19. The negative inductive effect of the groups  $-\text{NH}_2$ ,  $-\text{CN}$ ,  $-\text{C}_6\text{H}_5$  and  $-\text{NO}_2$  follow the order:  
(A)  $-\text{NH}_2 > -\text{CN} > -\text{C}_6\text{H}_5 > -\text{NO}_2$   
(B)  $-\text{NO}_2 > -\text{CN} > -\text{NH}_2 > -\text{C}_6\text{H}_5$   
(C)  $-\text{CN} > -\text{NH}_2 > -\text{C}_6\text{H}_5 > -\text{NO}_2$   
(D)  $-\text{CN} > -\text{NO}_2 > -\text{NH}_2 > -\text{C}_6\text{H}_5$
20. The total number of ions present in 1 ml of 0.1M  $\text{CaSO}_4$  solution is  
(A)  $6 \times 10^{23}$  (B)  $1.2 \times 10^{19}$   
(C)  $1.2 \times 10^{20}$  (D)  $1.8 \times 10^{20}$
21. 0.3 g of an organic compound on complete combustion gave 0.54 g of water and 0.88 g of carbon dioxide. Find the percentages of carbon and hydrogen in the compound.  
(A) C = 20 %, H = 80 %  
(B) C = 80 %, H = 20 %  
(C) C = 75 %, H = 25 %  
(D) C = 25 %, H = 75 %
22. Find the CORRECT statement(s) regarding thin layer chromatography.  
i. Stationary phase is solid.  
ii. Mobile phase is liquid.  
iii. It is an example of adsorption chromatography.  
iv. It is partition chromatography.  
(A) (i), (ii), (iii) (B) (ii), (iii)  
(C) (iii) (D) (iv)



23. The CORRECT statement regarding electrophile is \_\_\_\_\_.
- (A) Electrophile is a negatively charged species and can form a bond by accepting a pair of electrons from another electrophile
- (B) Electrophiles are generally neutral species and can form a bond by accepting a pair of electrons from a nucleophile
- (C) Electrophile can be either neutral or positively charged species and can form a bond by accepting a pair of electrons from a nucleophile
- (D) Electrophile is a negatively charged species and can form a bond by accepting a pair of electrons from a nucleophile

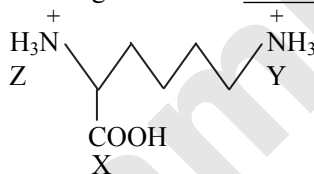
24. Which of the following reagents react with ethane?

- (i) alkaline  $\text{KMnO}_4$   
 (ii) Bromine in presence of light  
 (iii) Nitric acid at  $400^\circ\text{C}$   
 (iv)  $\text{H}_2\text{SO}_4 + \text{SO}_3$  prolonged heating
- (A) (i) (ii) (B) (ii) (iii)  
 (C) (iii) (iv) (D) (i) (iv)

25. Sulphonation of compound A followed by fusion with  $\text{NaOH}$  gives mixture of o-cresol and p-cresol. Compound A is \_\_\_\_\_.

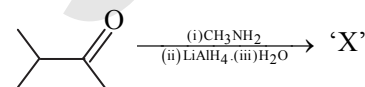
- (A) benzene  
 (B) toluene  
 (C) phenol  
 (D) benzene sulphonic acid

26. The CORRECT decreasing order of acid strength of functional groups 'X' 'Y' and 'Z' in the following structure is \_\_\_\_\_.



- (A)  $X > Z > Y$  (B)  $Z > X > Y$   
 (C)  $X > Y > Z$  (D)  $Y > X > Z$

27. The 'X' in the following reaction sequence is \_\_\_\_\_.



- (A) (B)   
 (C) (D)

28. Identify product 'X' in the following.



- (A) Salicylic acid (B) Adipic acid  
 (C) Glutaric acid (D) Succinic acid

29. For the given complex  $[\text{CoCl}_2(\text{en})(\text{NH}_3)_2]^+$ , the total number of isomers of all possible types is \_\_\_\_\_.

- (A) 4 (B) 3 (C) 2 (D) 6

30. Which is the correct order of basicity of aliphatic amines in gas phase?

- (A)  $3^\circ \text{ amines} > 2^\circ \text{ amines} > 1^\circ \text{ amines} > \text{ammonia}$   
 (B)  $3^\circ \text{ amines} > 2^\circ \text{ amines} > \text{ammonia} > 1^\circ \text{ amines}$   
 (C)  $2^\circ \text{ amines} > 3^\circ \text{ amines} > 1^\circ \text{ amines} > \text{ammonia}$   
 (D)  $2^\circ \text{ amines} > 1^\circ \text{ amines} > \text{ammonia} > 3^\circ \text{ amines}$

31. An excess of  $\text{AgNO}_3$  was added to 100 mL of 0.01M solution of dichlorotetraaquachromium(III) chloride.

The number of moles of  $\text{AgCl}$  precipitated would be \_\_\_\_\_.

- (A) 0.001 mol (B) 0.002 mol  
 (C) 0.003 mol (D) 0.01 mol

32. The resistance of a conductivity cell containing 0.001 M  $\text{KCl}$  solution at 298 K is 1500  $\Omega$ . What is the cell constant if conductivity of 0.001 M  $\text{KCl}$  solution at 298 K is  $0.146 \times 10^{-3} \text{ S cm}^{-1}$ ?

- (A)  $0.219 \text{ cm}^{-1}$  (B)  $2.19 \text{ cm}^{-1}$   
 (C)  $1.46 \text{ cm}^{-1}$  (D)  $3.24 \text{ cm}^{-1}$

33. Arrange the following compounds in increasing order of their reactivity towards nucleophilic addition reactions.

Ethanal, Propanal, Propanone, Butanone  
 (I) (II) (III) (IV)

- (A)  $\text{III} < \text{II} < \text{I} < \text{IV}$  (B)  $\text{II} < \text{I} < \text{III} < \text{IV}$   
 (C)  $\text{IV} < \text{III} < \text{II} < \text{I}$  (D)  $\text{I} < \text{II} < \text{III} < \text{IV}$

34. Given below are two statements: one is labelled as **Assertion A** and the other is labelled as **Reason R**:

**Assertion A:** Noble elements have large positive values of electron gain enthalpy.

**Reason R:** Stable electronic configuration of  $ns^2 np^6$

In the light of the above statements, choose the CORRECT answer from the options given below:

- (A) Both **A** and **R** are true and **R** is the correct explanation of **A**.  
 (B) Both **A** and **R** are true but **R** is NOT the correct explanation of **A**.  
 (C) **A** is true but **R** is false.  
 (D) **A** is false but **R** is true.



35. The charge on 1 mole  $N^{3-}$  ion is \_\_\_\_\_.
- (A)  $6.00 \times 10^6 C$  (B)  $2.89 \times 10^5 C$   
 (C)  $3.98 \times 10^4 C$  (D)  $4.86 \times 10^7 C$

Section B

36. Vitamin that contains long chains of aromatic compounds is \_\_\_\_\_.
- (A) vitamin C (B) vitamin K  
 (C) vitamin B<sub>5</sub> (D) vitamin B<sub>6</sub>

37. Given below are two statements:

**Statement I:** The equilibrium constant is independent of the presence of catalyst.

**Statement II:** If  $\Delta H = +ve$ , value of equilibrium constant is higher at higher temperature.

In the light of the above statements, choose the CORRECT answer from the options given below:

- (A) Both **Statement I** and **Statement II** are false.  
 (B) **Statement I** is correct but **Statement II** is false.  
 (C) **Statement I** is incorrect but **Statement II** is true.  
 (D) Both **Statement I** and **Statement II** are true.

38. \_\_\_\_\_ is a bleaching agent used in paper industry and water purification plant.

- (A)  $ClO_2$  (B)  $Cl_2O$   
 (C)  $Cl_2O_6$  (D)  $Cl_2O_7$

39. Given below are two statements: one is labelled as **Assertion A** and the other is labelled as **Reason R**:

**Assertion A:** Ionisation enthalpy of group 15 elements is much greater than the group 14 elements.

**Reason R:** Half-filled p-orbitals are more stable.

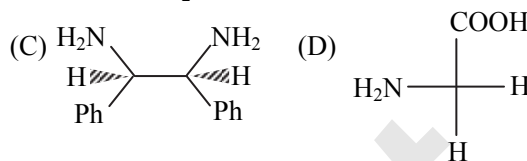
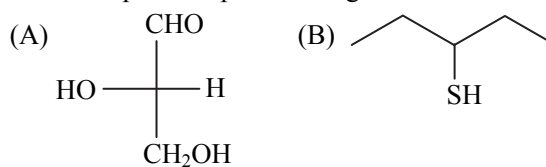
In the light of the above statements, choose the CORRECT answer from the options given below:

- (A) Both **A** and **R** are true and **R** is the correct explanation of **A**.  
 (B) Both **A** and **R** are true but **R** is NOT the correct explanation of **A**.  
 (C) **A** is true but **R** is false.  
 (D) **A** is false but **R** is true.

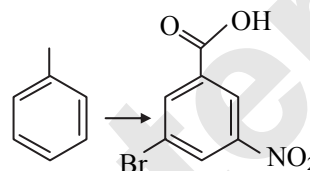
40. Which one of the following does NOT represent the CORRECT order for the property indicated against it?

- (A)  $Ti < V < Cr < Mn$  : increasing melting points  
 (B)  $Ti < V < Mn < Cr$  : increasing 2nd ionization enthalpy  
 (C)  $Ti < V < Cr < Mn$  : increasing number of oxidation states  
 (D)  $Ti^{3+} < V^{3+} < Cr^{3+} < Mn^{3+}$  : increasing magnetic moment

41. Which of the following molecules is expected to rotate the plane of polarised light?

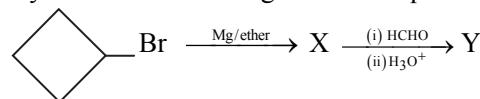



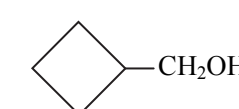
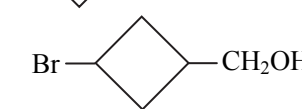

42. The following conversion can be carried out using the given reagents in the order of \_\_\_\_\_.



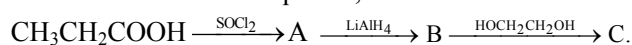
- (A)  $Br_2/FeBr_3, HNO_3/H_2SO_4, K_2Cr_2O_7/H_2SO_4, \Delta$   
 (B)  $K_2Cr_2O_7/H_2SO_4, \Delta, Br_2/FeBr_3, HNO_3/H_2SO_4$   
 (C)  $K_2Cr_2O_7/H_2SO_4, \Delta, HNO_3/H_2SO_4, Br_2/FeBr_3$   
 (D)  $HNO_3/H_2SO_4, Br_2/FeBr_3, K_2Cr_2O_7/H_2SO_4, \Delta$

43. Identify 'Y' in the following reaction sequence.

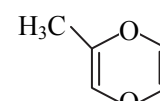
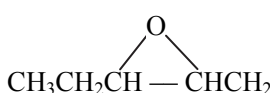


- (A)   
 (B)   
 (C)   
 (D) 

44. In the reaction sequence,



'C' is most likely to be \_\_\_\_\_.

- (A)   
 (B)  $CH_3CH_2CH \begin{cases} O-CH_2 \\ O-CH_2 \end{cases}$   
 (C)  $CH_3CH_2CHO \begin{cases} O-CH_2 \\ O-CH_2 \end{cases}$   
 (D) 



45. Which of the following statements is INCORRECT?
- (A) For a cyclic process,  $\Delta U = 0$ .  
 (B) In an adiabatic process,  $q = 0$   
 (C)  $\Delta H = \Delta U - \Delta nRT$   
 (D)  $C_v = \frac{3}{2}R$  (for monoatomic gas)
46. Reduction of  $(\text{CH}_3)_2\text{C} = \text{NOH}$  by Na and  $\text{C}_2\text{H}_5\text{OH}$  yields \_\_\_\_\_.
- (A) propan-2-amine  
 (B) propan-1-amine  
 (C) ethane-1, 2-diamine  
 (D) propane-1, 3-diamine
47. Which of the following qualifies to be a first order reaction's rate law?
- (A)  $\text{Rate} = K[\text{A}]^{\frac{3}{2}}[\text{B}]^{\frac{-1}{2}}[\text{C}]^{\frac{1}{2}}$   
 (B)  $\text{Rate} = K[\text{A}]^{\frac{3}{2}}[\text{B}]^{\frac{-1}{2}}$   
 (C)  $\text{Rate} = K[\text{A}]^{\frac{3}{2}}[\text{B}]^{-1}[\text{C}]^{\frac{-1}{2}}$   
 (D)  $\text{Rate} = K[\text{A}]^2[\text{B}]^1[\text{C}]^0$
48. In diatomic molecule of period two, if the z-axis is the internuclear axis, then the antibonding effect of electrons in  $\pi^* 2p_x$  orbital is less than \_\_\_\_\_.
- (A)  $\sigma 2p_z$                       (B)  $\pi^* 2p_y$   
 (C)  $\sigma^* 2p_z$                       (D)  $\pi 2p_y$
49. The equilibrium constant for the reaction:  $\text{N}_{2(\text{g})} + \text{O}_{2(\text{g})} \rightleftharpoons 2\text{NO}_{(\text{g})}$  is  $4 \times 10^{-4}$  at 2000 K. In presence of a catalyst, the equilibrium is attained ten times faster. Therefore, the equilibrium constant in presence of catalyst at 2000 K is \_\_\_\_\_.
- (A)  $4 \times 10^{-5}$                       (B)  $4 \times 10^{-2}$   
 (C)  $4 \times 10^{-3}$                       (D)  $4 \times 10^{-4}$
50.  $3\text{NaSCN} + \text{FeCl}_3 \rightarrow \text{x}$   
 What is x in the following reaction?
- (A)  $\text{Fe}(\text{SCN})_3$   
 (B)  $[\text{Fe}(\text{CN})_5\text{NOS}]^{4+}$   
 (C)  $\text{FeCN}$   
 (D)  $\text{Fe}(\text{CN})_3$

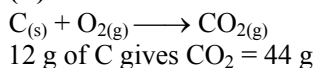
Page no. **143** to 162 are purposely left blank.

To see complete chapter buy **Target Notes** or **Target E-Notes**

## Answers & Solutions

### Topic Test – 01 Some Basic Concepts of Chemistry

1. (B)



$$\therefore 0.6 \text{ g of C will give } \text{CO}_2 = \frac{44}{12} \times 0.6 = 2.2 \text{ g}$$

$$\text{Moles of } \text{CO}_2 = \frac{2.2}{44} = 0.05$$

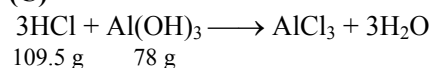
$$\text{Number of molecules} = 0.05 \times 6.022 \times 10^{23} \\ = 3.01 \times 10^{22}$$

2. (B)

Time taken to distribute  $10^{20}$  grains = 1 second

$$\therefore \text{Time taken to distribute } 6.022 \times 10^{23} \text{ grains} \\ = \frac{6.022 \times 10^{23}}{10^{20}} \\ = 6.022 \times 10^3 \text{ seconds} = 1.673 \text{ hours}$$

3. (C)



$$\text{Amount of HCl produced in one day} = 2.5 \times 3 \\ = 7.5 \text{ g}$$

109.5 g of HCl requires 78 g of  $\text{Al}(\text{OH})_3$ .

$$\therefore 7.5 \text{ g of HCl will require } \frac{78 \times 7.5}{109.5} \text{ g of } \text{Al}(\text{OH})_3 \\ = 5.34 \text{ g of } \text{Al}(\text{OH})_3$$

$$\therefore \text{Number of tablets required} = \frac{5.34}{0.300} \\ = 17.8 \approx 18 \text{ tablets}$$

4. (D)


$\therefore$  6 moles of HCl give 3 moles of hydrogen gas.

$\therefore$  1 mole of HCl will give 0.5 mole of hydrogen gas.

Volume occupied by 1 mole of hydrogen gas at STP = 22.4 L

Volume occupied by 0.5 mole of hydrogen gas = 11.2 L at STP

5. (B)



According to law of conservation of mass,

Total mass of reactants = Total mass of products

$$\text{Mass of } \text{BaCl}_2 \cdot x\text{H}_2\text{O} = \text{Mass of } \text{BaCl}_2 \\ + \text{Mass of } \text{H}_2\text{O} \\ 61 = 52 + \text{Mass of } \text{H}_2\text{O}$$

Mass of  $\text{H}_2\text{O} = 9$  g

$$\text{Number of moles of } \text{H}_2\text{O} = \frac{9}{18} = \frac{1}{2}$$

$$\text{Number of moles of } \text{BaCl}_2 = \frac{52}{208} = \frac{1}{4}$$

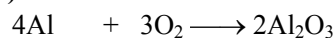
$\therefore$  The ratio of number of moles of  $\text{BaCl}_2$  to  $\text{H}_2\text{O}$

$$\text{is, } n_{(\text{BaCl}_2)} : n_{(\text{H}_2\text{O})} = \frac{1}{4} : \frac{1}{2} = \frac{1}{2}$$

$\therefore$  The formula of the hydrated salt is  $\text{BaCl}_2 \cdot 2\text{H}_2\text{O}$ .

6. (C)

7. (B)



$$4 \times 27 = 108 \text{ g } 3 \text{ mol}$$

Amount of Al that combines with 3 moles of  $\text{O}_2 = 108$  g

$\therefore$  Amount of Al that combines with 1.5 moles of  $\text{O}_2 = 54$  g

8. (B)

Number of molecules =  $n \times$  Avogadro number ( $N_A$ )

Molecular formula =  $n \times$  Empirical formula

Normality =  $x \times$  molarity

Where  $x = \frac{\text{mol. wt}}{\text{Eq. wt}}$ ,  $x =$  Valency or change in oxidation number

9. (C)

$$^\circ\text{F} = \frac{9}{5} (^\circ\text{C}) + 32$$

$$x = \frac{9x}{5} + 32$$

$$x - 32 = \frac{9x}{5}$$

$$5x - 160 = 9x$$

$$-4x = 160$$

$$x = -40^\circ$$

10. (A)

$$\% \text{ of N} = \frac{\text{Mass of nitrogen atom}}{\text{Molar mass of compound}} \times 100$$

$$20 = \frac{14}{M} \times 100$$

$$M = 70 \text{ g}$$

11. (A)

Moles of  $\text{H}_2\text{SO}_4 = 0.1$  moles

Moles of  $\text{NaOH} = 0.1$  moles



1 mole of  $\text{H}_2\text{SO}_4$  reacts with 2 moles of  $\text{NaOH}$ .

$\therefore$  0.1 mole of  $\text{H}_2\text{SO}_4$  will react with 0.2 moles of  $\text{NaOH}$ .

$\therefore$   $\text{NaOH}$  is limiting reactant.

2 moles of  $\text{NaOH}$  give 1 mole of  $\text{Na}_2\text{SO}_4$ .

$\therefore$  0.1 mole of  $\text{NaOH}$  will give 0.05 mole of  $\text{Na}_2\text{SO}_4$ .

$$\text{Mass of } \text{Na}_2\text{SO}_4 = 0.05 \times 142 = 7.10 \text{ g}$$



12. (A)  
Molar mass =  $2 \times \text{V.D.} = 2 \times 11.2$   
 $= 22.4 \text{ g mol}^{-1}$   
Volume occupied by 1 mole of gas = 22.4 L  
(at STP)  
 $\therefore$  Volume occupied by 2 g of gas =  $\frac{22.4}{22.4} \times 2$   
 $= 2 \text{ L}$
13. (D)  
 $\text{Ca(OH)}_2 + \text{CO}_2 \longrightarrow \text{CaCO}_3 + \text{H}_2\text{O}$   
50 mL of 0.5 M  $\text{Ca(OH)}_2 = 0.025$  mole of  $\text{Ca(OH)}_2$   
1 mole of  $\text{Ca(OH)}_2$  gives 1 mole of  $\text{CaCO}_3$ .  
 $\therefore$  0.025 mole of  $\text{Ca(OH)}_2$  will give 0.025 mole of  $\text{CaCO}_3$ .  
 $\text{CaCO}_3 + 2\text{HCl} \longrightarrow \text{CaCl}_2 + \text{H}_2\text{O} + \text{CO}_2$   
1 mole of  $\text{CaCO}_3$  is neutralized by 2 moles of HCl.  
 $\therefore$  0.025 mole of  $\text{CaCO}_3$  will be neutralized by 0.05 mole of HCl.  
For 0.1 M HCl solution,  
0.1 mole of HCl is present in 1000 mL of solution.  
 $\therefore$  0.05 mole of HCl will be present in 500 mL of solution.
14. (A)  
Number of moles of  $\text{H}_2\text{SO}_4$   
 $= \text{Molarity} \times \text{Volume in L}$   
 $\therefore$  Number of moles of  $\text{H}_2\text{SO}_4 = 0.02 \times \frac{100}{1000}$   
 $= 2 \times 10^{-3}$  moles  
Number of molecules = Number of moles  $\times N_A$   
 $= 2 \times 10^{-3} \times 6.022 \times 10^{23}$   
 $= 12.044 \times 10^{20}$  molecules
15. (C)  
Number of hydrogen atoms in one mole or 17 g of  $\text{NH}_3 = 3 \times 6.022 \times 10^{23}$   
Number of hydrogen atoms in 8.5 g of  $\text{NH}_3$   
 $= \frac{3}{17} \times 8.5 \times 6.022 \times 10^{23} = 9.033 \times 10^{23}$
16. (A)  
 $2\text{BCl}_3 + 3\text{H}_2 \longrightarrow 2\text{B} + 6\text{HCl}$   
 $3 \times 22.4 \quad 2 \times 10.8$   
 $= 67.2 \text{ L} \quad = 21.6 \text{ g}$   
Volume of hydrogen gas consumed = 67.2 L
17. (D)  
Solution: Law of multiple proportions is applied only on binary compounds whose constituent particles form more than one compound. Since  $\text{Al}_2\text{O}_3$  can form only one compound i.e.  $\text{Al}_2\text{O}_3$ , law of multiple proportions is not applied in this case.
18. (C)  
 $\text{MCl}_x + x\text{AgNO}_3 \longrightarrow x\text{AgCl} + \text{M(NO}_3)_x$   
25  $\text{cm}^3$  of 0.2 M  $\text{MCl}_x = 5 \times 10^{-3}$  moles  
150  $\text{cm}^3$  of 0.1 M  $\text{AgNO}_3 = 15 \times 10^{-3}$  moles  
1 mole of  $\text{MCl}_x$  reacts with  $x$  moles of  $\text{AgNO}_3$ .  
 $\therefore$   $5 \times 10^{-3}$  moles of  $\text{MCl}_x$  will react with  $5x \times 10^{-3}$  moles of  $\text{AgNO}_3$ .  
Since the given amount of  $\text{MCl}_x$  react completely with  $15 \times 10^{-3}$  moles of  $\text{AgNO}_3$ ,  
 $5x \times 10^{-3} = 15 \times 10^{-3}$   
 $\therefore$   $x = 3$   
 $\therefore$  The formula of the metal chloride will be  $\text{MCl}_3$ .
19. (A)  
Amount of C-14 in 12 g of carbon =  $\frac{2}{100} \times 12$   
 $= 0.24 \text{ g}$   
Number of C-14 atoms =  $\frac{0.24}{14} \times 6.022 \times 10^{23}$   
 $= 1.032 \times 10^{22}$
20. (B)  
Equal volumes are occupied by equal number of moles of gases under identical conditions of temperature and pressure.  
 $\therefore \frac{84}{M} = \frac{96}{32}$   
 $\therefore M = 28 \text{ g}$
21. (C)  
Compounds are pure substances formed by the combination of two or more than two elements. The elements are present in fixed proportion by mass and they can be decomposed into their constituent elements by suitable chemical methods. Compounds do not retain the properties of its constituent elements.
22. (C)  
Molarity of a solution depends upon temperature because volume of a solution is temperature dependent and molality of a solution is temperature independent since mass remains unaffected with temperature.
23. (B)  
2 g of dihydrogen =  $6.022 \times 10^{23}$  molecules  
 $\therefore$  1 g of dihydrogen =  $\frac{6.022 \times 10^{23}}{2}$   
 $= 3.011 \times 10^{23}$  molecules
24. (A)  
 $\text{BaCO}_3 \longrightarrow \text{BaO} + \text{CO}_2$   
1 mole of  $\text{BaCO}_3$  produces 1 mole of  $\text{CO}_2$ .  
19.73 g of  $\text{BaCO}_3 = 0.1$  mol of  $\text{BaCO}_3$   
 $\therefore$  0.1 mol of  $\text{BaCO}_3$  will produce 0.1 mol of  $\text{CO}_2$   
Now, 1 mol of  $\text{CO}_2 \equiv 22.4 \text{ L}$  at STP  
 $\therefore$  0.1 mol of  $\text{CO}_2 = 2.24 \text{ L}$  at STP  
 $\therefore$  19.73 g  $\text{BaCO}_3$  will produce 2.24 L  $\text{CO}_2$  at STP on the complete decomposition.



25. (C)  
Empirical formula mass = 12 + 2 + 16 = 30  
 $n = \frac{\text{Molecular formula mass}}{\text{Empirical formula mass}}$   
 $= \frac{180}{30} = 6$   
Molecular formula =  $n \times$  Empirical formula  
 $= 6 \times (\text{CH}_2\text{O})$   
 $= \text{C}_6\text{H}_{12}\text{O}_6$
26. (B)  
Number of moles of oxygen in 1 mole of  $\text{Na}_2\text{CO}_3 \cdot 10\text{H}_2\text{O} = 13$   
 $\therefore$  Oxygen in 0.1 mole of  $\text{Na}_2\text{CO}_3 \cdot 10\text{H}_2\text{O} = 1.3$  moles  
 $\therefore$  Mass of oxygen =  $1.3 \times 16 = 20.8$  g.
27. (B)  
% of unknown element  
 $Y = 100 - (39.62 + 40.25)$   
 $= 100 - 79.87$   
 $= 20.13$   
Now, % of Y =  $\frac{\text{Atomic mass of Y}}{\text{Molar mass}} \times 100$   
 $20.13 = \frac{\text{Atomic mass of Y}}{159} \times 100$   
 $\therefore$  Atomic mass of Y = 32.0  
 $\therefore$  The unknown element is sulphur (S).
28. (B)  
1 mole of  $\text{XCl}_4$  contains 4 moles of chlorine.  
0.5 mole of chlorine is present in 25 g of  $\text{XCl}_4$ .  
 $\therefore$  4 moles of chlorine will be present in  $\frac{25}{0.5} \times 4$   
 $= 200$  g of  $\text{XCl}_4$ .
29. (C)  
The maximum volume of 0.25 M HCl cannot be more than 2 litres because there is no addition of water.  
Let  $x$  litre of 0.40 M HCl be added to 1 litre of 0.15 M HCl.  
 $\therefore M_1V_1 + M_2V_2 = M_3V_3$   
 $0.15 \times 1 + 0.40 \times x = 0.25(1 + x)$   
 $0.15x = 0.10$   
 $x = 0.667$   
 $\therefore$  Total volume of 0.25 M HCl solution  
 $= 1 + x = 1 + 0.667 = 1.667$  L
30. (B)  
Molar mass of  $\text{O}_2 = 32 \text{ g mol}^{-1}$   
32 g of  $\text{O}_2 = 6.022 \times 10^{23}$  molecules  
 $\therefore$  40 g of  $\text{O}_2 = \frac{6.022 \times 10^{23} \times 40}{32}$   
 $= 7.527 \times 10^{23}$  molecules  
Mass of  $6.022 \times 10^{23}$  molecules of  $\text{CO}_2 = 44$  g  
 $\therefore$  Mass of  $7.527 \times 10^{23}$  molecules of  $\text{CO}_2$   
 $= \frac{44 \times 7.527 \times 10^{23}}{6.022 \times 10^{23}} \approx 55$  g
31. (B)  
Amount of KI in 2 g of the salt =  $\frac{2}{100} = 0.02$  g  
Number of moles of KI =  $\frac{0.02}{166}$   
 $= 1.20 \times 10^{-4}$   
 $1.2 \times 10^{-4}$  moles of KI will contain  
 $1.2 \times 10^{-4}$  moles of iodide ions.  
1 mole of iodide ions contains  $6.022 \times 10^{23}$  ions of  $\Gamma^-$ .  
 $\therefore$   $1.2 \times 10^{-4}$  moles of iodide ions will contain  
 $7.2 \times 10^{19}$   $\Gamma^-$  ions.
32. (D)  
 $4\text{NH}_3(\text{g}) + 5\text{O}_2(\text{g}) \longrightarrow 4\text{NO}(\text{g}) + 6\text{H}_2\text{O}(\text{l})$   
4 moles of  $\text{NH}_3$  give  $\longrightarrow$  4 moles of NO  
 $\therefore$  1 mole of  $\text{NH}_3$  gives  $\longrightarrow$  1 mole of NO  
5 moles of  $\text{O}_2$  give  $\longrightarrow$  4 moles of NO  
 $\therefore$  1 mole of  $\text{O}_2$  gives =  $\frac{4}{5} = 0.8$  mole of NO  
Thus,  $\text{O}_2$  is the limiting reactant.  
 $\therefore$  Amount of NO formed is decided by amount of  $\text{O}_2$ .  
Amount of NO formed = 0.8 mol =  $0.8 \times 30$  g  
 $= 24$  g
33. (D)  
Number of moles of  $\text{H}_2 = \frac{1}{2}$   
Number of moles of  $\text{O}_2 = \frac{4}{32}$   
Hence, molar ratio of  $\text{H}_2$  and  $\text{O}_2 = \frac{1}{2} : \frac{4}{32} = 4 : 1$
34. (D)
35. (B)  
Let weight of original mixture be 1 g and amount of NaI present in the mixture be  $x$  g.  
 $\therefore$  Amount of NaCl present in the mixture  
 $= (1 - x)$  g  
 $2\text{NaI} + \text{H}_2\text{SO}_4 \rightarrow \text{Na}_2\text{SO}_4 + 2\text{HI}$   
300 g of NaI gives 142 g of  $\text{Na}_2\text{SO}_4$ .  
 $\therefore$   $x$  g of NaI will give  $0.47x$  g of  $\text{Na}_2\text{SO}_4$ .  
 $2\text{NaCl} + \text{H}_2\text{SO}_4 \rightarrow \text{Na}_2\text{SO}_4 + 2\text{HCl}$   
117 g of NaCl gives 142 g of  $\text{Na}_2\text{SO}_4$ .  
 $\therefore$   $(1 - x)$  g of NaCl will give  $1.21(1 - x)$  g of  $\text{Na}_2\text{SO}_4$ .  
Since, amount of  $\text{Na}_2\text{SO}_4$  produced is equal to the weight of original mixture.  
 $\therefore$   $0.47x + 1.21(1 - x) = 1$   
 $0.47x + 1.21 - 1.21x = 1$   
 $0.74x = 0.21$   
 $x = 0.2838$   
 $\therefore$  % of NaI in the original mixture = 28.38%





36. (D)  
22.4 L of a gas at STP has number of molecules  
 $= 6.022 \times 10^{23}$   
 $\therefore$  8.96 L of a gas at STP has number of molecules  
 $= \frac{6.022 \times 10^{23} \times 8.96}{22.4}$   
 $= 2.409 \times 10^{23}$   
 $= 24.09 \times 10^{22}$
37. (B)  
Percentage of hydrogen in sample 1  
 $= \frac{0.2}{0.2+3.2} \times 100 = 5.88\%$   
 Percentage of oxygen in sample 2  
 $= \frac{3.2}{0.2+3.2} \times 100 = 94.12\%$   
 The two samples of the compound have same percentage composition.  
 Hence, it proves the law of definite proportion.
38. (D)  
18 g of water contain 2 g of hydrogen.  
 $\therefore$  0.72 g of water will contain 0.08 g of hydrogen.  
 44 g of  $\text{CO}_2$  contain 12 g of carbon.  
 $\therefore$  3.08 g of  $\text{CO}_2$  will contain 0.84 g of carbon.  
 Number of moles of carbon  $= \frac{0.84}{12} = 0.07$   
 Number of moles of hydrogen  $= \frac{0.08}{1} = 0.08$   
 $\text{C} : \text{H} = 0.07 : 0.08 = 7 : 8$   
 $\therefore$  Empirical formula of hydrocarbon  $= \text{C}_7\text{H}_8$
39. (B)  
Empirical formula mass can be determined from the empirical formula.
40. (D)  
Atomic mass of the given element  
 $= 6.022 \times 10^{23} \times 10.86 \times 10^{-26} \text{ kg mol}^{-1}$   
 $= 65.4 \times 10^{-3} \text{ kg mol}^{-1}$   
 $= 65.4 \text{ g mol}^{-1}$   
 $\therefore$  The element whose atom has mass of  $10.86 \times 10^{-26} \text{ kg}$  is zinc.
41. (D)                      42. (A)
43. (A)  
Amount of pure ethyl alcohol  $= 81.4 - 0.002$   
 $= 81.398 \text{ g}$
44. (D)  
1 mole of  $\text{CO}_2 = N_A$  molecules  
 Electrons in one molecule of  $\text{CO}_2 = 6 + 8 \times 2$   
 $= 22$   
 Thus, electrons in  $N_A$  molecules  $= 22 N_A$

45. (A)  
Molar mass of  $\text{CH}_4 = 16 \text{ g mol}^{-1}$   
 Molar mass of  $\text{C}_2\text{H}_4 = 28 \text{ g mol}^{-1}$   
 The average molar mass of a mixture when methane and ethene are present in the ratio of a:b is,  
 Average molar mass  $= \frac{a \times 16 + b \times 28}{a + b}$   
 $20 = \frac{a \times 16 + b \times 28}{a + b}$   
 $20a + 20b = 16a + 28b$   
 $4a = 8b$   
 $\frac{a}{b} = \frac{2}{1}$   
 If the ratio is reversed, then new ratio will be 1:2  
 Average molar mass  $= \frac{1 \times 16 + 2 \times 28}{1 + 2}$   
 $= 24 \text{ g mol}^{-1}$
46. (C)  
According to Avogadro's law, ratio of the volumes of gases will be equal to the ratio of their no. of moles.  
 No. of moles  $= \frac{\text{Mass}}{\text{Molar mass}}$   
 $n_{\text{H}_2} = \frac{w}{2}$ ;  $n_{\text{O}_2} = \frac{w}{32}$ ;  $n_{\text{CH}_4} = \frac{w}{16}$   
 Hence, the ratio is  $\frac{w}{2} : \frac{w}{32} : \frac{w}{16}$  or 16 : 1 : 2.
47. (A)  

$$\begin{array}{ccccccc} \text{N}_2 & + & 3\text{H}_2 & \longrightarrow & 2\text{NH}_3 \\ 28 & & 6 & & 34 \end{array}$$
 1 mole of  $\text{N}_2$  (28 g) combine with 3 moles of  $\text{H}_2$  (6 g).  
 $\therefore$  3 kg of  $\text{H}_2$  will react with  $\frac{28}{6} \times 3 = 14 \text{ kg}$  of  $\text{N}_2$   
 $\therefore$   $\text{H}_2$  is limiting reagent.  
 6 g of  $\text{H}_2$  react to form 34 g of  $\text{NH}_3$ .  
 $\therefore$  3.0 kg of  $\text{H}_2$  will react to form  $\frac{34 \times 3}{6} \text{ kg}$  of  $\text{NH}_3$   
 $= 17 \text{ kg}$  of  $\text{NH}_3$
48. (A)  
Let atomic mass of metal 'M' be x.  
 % of oxygen in  $\text{M}_2\text{O} = \frac{16}{2x+16} \times 100$   
 $36.4 = \frac{16}{2x+16} \times 100$   
 $72.8x + 582.4 = 1600$   
 $x = 13.978$   
 In case of MO,  
 % of oxygen in MO  $= \frac{16}{13.978+16} \times 100$   
 $= 53.4\%$   
 Therefore, the formula of second oxide will be MO.

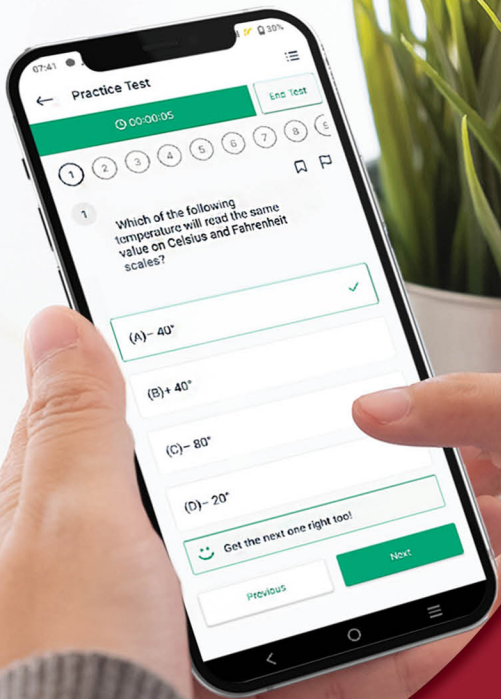


49. (B)  
When Avogadro number is  $6.022 \times 10^{23} \text{ mol}^{-1}$ ,  
the mass of 1 mole of carbon = 12 g  
 $\therefore$  Mass of 1 mole of carbon when Avogadro  
number is  $6.022 \times 10^{20} \text{ mol}^{-1}$   
 $= \frac{12 \times 6.022 \times 10^{20}}{6.022 \times 10^{23}} = 12 \times 10^{-3} \text{ g}$   
Thus, the mass of 1 mole of carbon is changed.
50. (A)  
(A) 34 g of water  
18 g of  $\text{H}_2\text{O} = 6.022 \times 10^{23}$  molecules  
 $\therefore$  34 g of  $\text{H}_2\text{O} = \frac{6.022 \times 10^{23}}{18} \times 34$   
 $= 11.37 \times 10^{23}$  molecules

- (B) 28 g of  $\text{CO}_2$   
44 g of  $\text{CO}_2 = 6.022 \times 10^{23}$  molecules  
 $\therefore$  28 g of  $\text{CO}_2 = \frac{6.022 \times 10^{23}}{44} \times 28$   
 $= 3.8 \times 10^{23}$  molecules
- (C) 46 g of  $\text{CH}_3\text{OH}$   
32 g of  $\text{CH}_3\text{OH} = 6.022 \times 10^{23}$  molecules  
 $\therefore$  46 g of  $\text{CH}_3\text{OH} = \frac{6.022 \times 10^{23}}{32} \times 46$   
 $= 8.65 \times 10^{23}$  molecules
- (D) 54 g of  $\text{N}_2\text{O}_5$   
108 g of  $\text{N}_2\text{O}_5 = 6.022 \times 10^{23}$  molecules  
 $\therefore$  54 g of  $\text{N}_2\text{O}_5 = \frac{6.022 \times 10^{23}}{108} \times 54$   
 $= 3.011 \times 10^{23}$  molecules.

### Topic Test – 02 Structure of Atom

1. (A)  
 $\Delta x \cdot \Delta v = \frac{h}{4\pi m}$   
 $\Delta v = \frac{h}{4\pi m \Delta x}$   
 $= \frac{6.626 \times 10^{-34}}{10^{-4} \times 0.25 \times 10^{-3} \times 4 \times 3.14}$   
 $= 2.11 \times 10^{-27} \text{ m s}^{-1}$
2. (A)  
Ionization energy is the amount of energy  
required to remove an electron from an isolated  
gaseous atom in its ground state ( $n = 1$ ).  
 $\Delta E = E_\infty - E_1$   
 $= 0 - \frac{(-13.6)}{1^2}$   
 $= 13.6 \text{ eV}$
3. (A)  
 $E = h\nu$   
 $= \frac{hc}{\lambda} \left( \because \nu = \frac{c}{\lambda} \right)$   
 $= \frac{6.626 \times 10^{-34} \times 3 \times 10^8}{300 \times 10^{-9}} \quad (\because 1 \text{ nm} = 10^{-9} \text{ m})$   
 $= 6.626 \times 10^{-19} \text{ J}$
4. (C)
5. (D)  
 $w = h\nu_0$   
 $= 6.626 \times 10^{-34} \times 2 \times 10^{15}$   
 $= 1.325 \times 10^{-18}$   
 $= 13.25 \times 10^{-19} \text{ J}$
6. (B)  
For  $n = 1$ , the possible values of  $l$  and  $m$  can  
only be 0.  
 $n = 1, l = 0, m = 0, s = +\frac{1}{2}$
7. (C)  
The energy of an electron in the  $n^{\text{th}}$  orbit,  
 $E_n = \frac{-2.18 \times 10^{-18} Z^2}{n^2} \text{ J}$   
 $= \frac{-2.18 \times 10^{-18} \times (3)^2}{(1)^2} \text{ J}$   
 $= -1.96 \times 10^{-17} \text{ J}$
8. (A)  
 $\lambda = \frac{h}{mv}$   
 $= \frac{6.626 \times 10^{-34}}{10^{-3} \times 10} = 6.626 \times 10^{-32} \text{ m}$
9. (A)  
 $\Delta E = 2.18 \times 10^{-18} \left[ \frac{1}{(3)^2} - \frac{1}{(1)^2} \right]$   
 $= 2.18 \times 10^{-18} \times (-0.888)$   
 $\Delta E = -1.935 \times 10^{-18} \text{ J}$   
It is an emission energy and the frequency of  
photon can be calculated by taking energy in  
terms of magnitude.  
 $\Delta E = h\nu$   
 $\nu = \frac{\Delta E}{h}$   
 $= \frac{1.935 \times 10^{-18} \text{ J}}{6.626 \times 10^{-34} \text{ Js}}$   
 $= 0.292 \times 10^{16} \text{ s}^{-1}$   
 $\nu = 2.92 \times 10^{15} \text{ Hz}$



Give your NEET & JEE exam preparation the **TECHNOLOGY BOOST!**

Practice more than **17,000 MCQs**

Use Coupon Code **QUILLPADHAI2023**



Also available for **X<sup>th</sup>, XI<sup>th</sup>, XII<sup>th</sup> & MHT-CET**

- Practice chapter-wise & full syllabus MCQs in test format
- Get instant verification of your answer
- Detailed analysis of every test on completion
- Option to save questions for future reference




Scan QR Code to download the app

Visit our website to know more about our range of books for **X<sup>th</sup>, XI<sup>th</sup>, XII<sup>th</sup> & MHT-CET**

**Visit Our Website**

Published by:

**Target Publications® Pvt. Ltd.**  
Transforming lives through learning



Explore our range of **NEET & JEE** Books

B2, 9<sup>th</sup> Floor, Ashar, Road No. 16/Z, Wagle Industrial Estate, Thane (W)-400604 | 88799 39712 / 14 | 88799 39713 / 15

www.targetpublications.org | mail@targetpublications.org